

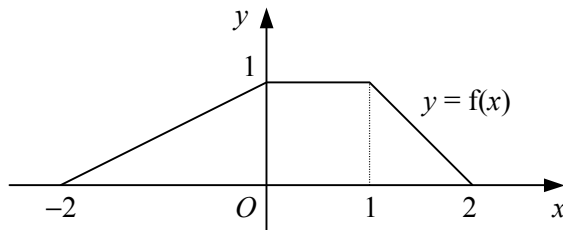
- 1 a Solve the simultaneous equations

$$y = 3x - 4$$

$$y = 4x^2 - 9x + 5 \quad (4)$$

- b Hence, describe the geometrical relationship between the straight line  $y = 3x - 4$  and the curve  $y = 4x^2 - 9x + 5$ . (1)

2

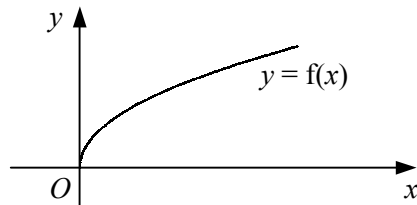


The diagram shows the graph of  $y = f(x)$  which is defined for  $-2 \leq x \leq 2$ .

Labelling the axes in a similar way, sketch on separate diagrams the graphs of

- a  $y = 3f(x)$ , (2)  
 b  $y = f(x + 1)$ , (2)  
 c  $y = f(-x)$ . (2)
- 3 a Show that the line  $y = 4x + 1$  does not intersect the curve  $y = x^2 + 5x + 2$ . (4)  
 b Find the values of  $m$  such that the line  $y = mx + 1$  meets the curve  $y = x^2 + 5x + 2$  at exactly one point. (4)

4



The diagram shows the curve with the equation  $y = f(x)$  where

$$f(x) \equiv \sqrt{x}, \quad x \geq 0.$$

- a Sketch on the same set of axes the graphs of  $y = 1 + f(x)$  and  $y = f(x + 3)$ . (4)  
 b Find the coordinates of the point of intersection of the two graphs drawn in part a. (4)
- 5 The curve  $C$  has the equation  $y = x^2 + kx - 3$  and the line  $l$  has the equation  $y = k - x$ , where  $k$  is a constant.  
 Prove that for all real values of  $k$ , the line  $l$  will intersect the curve  $C$  at exactly two points. (7)

6

$$f(x) \equiv 2x^2 - 4x + 5.$$

- a Express  $f(x)$  in the form  $a(x + b)^2 + c$ . (3)  
 b Showing the coordinates of the turning point in each case, sketch on the same set of axes the curves  
 i  $y = f(x)$ ,  
 ii  $y = f(x + 3)$ . (4)

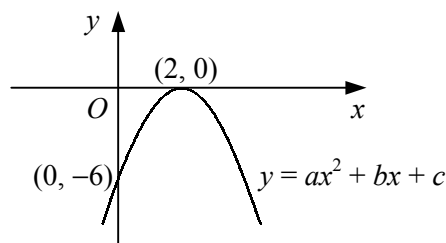
- 7 a Sketch on the same diagram the straight line  $y = 2x - 5$  and the curve  $y = x^3 - 3x^2$ , showing the coordinates of any points where each graph meets the coordinate axes. (4)

- b Hence, state the number of real roots that exist for the equation

$$x^3 - 3x^2 - 2x + 5 = 0,$$

- giving a reason for your answer. (2)

8



The diagram shows the curve with the equation  $y = ax^2 + bx + c$ .

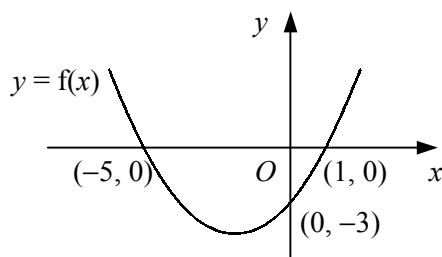
Given that the curve crosses the  $y$ -axis at the point  $(0, -6)$  and touches the  $x$ -axis at the point  $(2, 0)$ , find the values of the constants  $a$ ,  $b$  and  $c$ . (6)

- 9 a Show that

$$(1 - x)(2 + x)^2 \equiv 4 - 3x^2 - x^3. \quad (3)$$

- b Hence, sketch the curve  $y = 4 - 3x^2 - x^3$ , showing the coordinates of any points of intersection with the coordinate axes. (3)

10



The diagram shows the curve with equation  $y = f(x)$  which crosses the coordinate axes at the points  $(-5, 0)$ ,  $(1, 0)$  and  $(0, -3)$ .

Showing the coordinates of any points of intersection with the axes, sketch on separate diagrams the curves

a  $y = -f(x)$ , (2)

b  $y = f(x - 5)$ , (2)

c  $y = f(2x)$ . (2)

- 11 a Describe fully the transformation that maps the graph of  $y = f(x)$  onto the graph of  $y = f(x + 1)$ . (2)

- b Sketch the graph of  $y = \frac{1}{x+1}$ , showing the coordinates of any points of intersection with the coordinate axes and the equations of any asymptotes. (3)

- c By sketching another suitable curve on your diagram in part b, show that the equation

$$x^3 - \frac{1}{x+1} = 2$$

- has one positive and one negative real root. (4)