


# Units and Physical Quantities

## Workbook



With experience some of these steps can be done more quickly or in your head but you should always show your working. This is for several reasons:-

1. If you don't show your working, you will needlessly lose many marks in the exam (probably enough to drop your score by one whole grade, i.e. from B  $\rightarrow$  C).
2. It will help make the steps outlined above more apparent and easy to follow when tackling numerical problems.
3. It makes it easier for the teacher to see where you have gone wrong and therefore help you learn more quickly and effectively.

## Chapter 2:

### Physical Quantities/Units

When we first look at numerical problem in Physics we need to be able to recognise what quantities we are given in the question. This can be made a lot easier if we know what quantity corresponds to the units given in the question. For example, if a question says someone's speed changes at a rate of  $5 \text{ ms}^{-2}$ , you need to be able to recognise that  $\text{ms}^{-2}$  is the unit of acceleration and so we know that we have been given an acceleration (even though the word acceleration wasn't used in the question).

We can classify physical quantities as either

- (a) Basic: These are **fundamental** which are **defined** as being independent

There are seven basic quantities defined by the Systeme International d'Unites (SI Units). They have been defined for convenience not through necessity (force could have been chosen instead of mass, for instance). Once defined we can make measurements using the correct unit and measure with direct comparison to that unit.

Basic quantity	Unit	
	Name	Symbol
Mass	Kilogram	kg
Length	Metre	m
Time	Second	s
Electric current	Ampere	A
Temperature	Kelvin	K
Amount of a substance	Mole	mol
Luminous intensity	Candela	cd

NOTE: Base units are also referred to as dimensions. You do not need to learn this table, it is included for information only.

- (b) **Derived:** These are obtained by multiplication or division of the basic units **without** numerical factors. For example:

Derived quantity	Unit	
	Name	Symbols used
Volume	Cubic metre	m <sup>3</sup>
Velocity	Metre per second	ms <sup>-1</sup>
Density	Kilogram per cubic metre	kgm <sup>-3</sup>

Some derived SI units are complicated and are given a simpler name with a unit defined in terms of the base units.

**Farad (F)** is given as  $\text{m}^{-2}\text{kg}^{-1}\text{s}^4\text{A}^2$

**Watt (W)** is given as  $\text{m}^2\text{kg}\text{s}^{-3}$

A table of quantities with their units is below along with the most commonly used symbols for both the quantities and units. (*Note that in GCSE we wrote units like metres per second in the format of m/s but in A-level it is written as ms<sup>-1</sup>, and this is the standard way units are written at university level Physics.*)

Quantity	Quantity	SI Unit	Unit Symbol
Length	L or l	Metre	m
Distance	s	Metre	m
Height	h	Metre	m
Thickness (of a Wire)	d	Metre	m
Wavelength	$\lambda$	Metre	m
Mass	m or M	kilogram	kg
Time	t	second	s
Period	T	second	s
Temperature	T	Kelvin	K
Current	I	Ampere	A
Potential Difference	V	Volt	V
Area	A	Metres squared	m <sup>2</sup>
Volume	V	Metres cubed	m <sup>3</sup>
Density	$\rho$	Kilograms per metre cubed	kg m <sup>-3</sup>
Force	F	Newton	N
Initial Velocity	u	Metres per second	ms <sup>-1</sup>
Final Velocity	v	Metres per second	ms <sup>-1</sup>
Energy	E	Joule	J
Kinetic Energy	E <sub>k</sub>	Joule	J
Work Done	W	Joule	J
Power	P	Watt	W
Frequency	f	Hertz	Hz
Charge	Q	Coulomb	C
Resistance	R	Ohm	$\Omega$
Resistivity	$\rho$	Ohm Metre	$\Omega\text{m}$
Momentum	p	kilogram metres per second	kg ms <sup>-1</sup>
Gravitational Field Strength	g	Newtons per kilogram	N kg <sup>-1</sup>

## Chapter 3:

### Standard Form

You may well already be familiar with Standard Form from GCSE Maths, but just in case you aren't or could do with refreshing your memory then this chapter will explain what it is and why we use it.

#### *Why use standard form?*

Standard form is used to make very large or very small numbers easier to read. Standard form also makes it easier to put large or small numbers in order of size.

In Physics, we often deal with quantities that are either really large, such as a parsec

$$1 \text{ pc} = 30\,900\,000\,000\,000\,000 \text{ m}$$

Or really small like Planck's Constant:-

$$h = 0.000663 \text{ Js}$$

Now, it would be tiresome to write out numbers like this over and over again and so we use a different notation known as standard form. Standard form shows the magnitude (size) of the number as powers of ten. We write a number between 1 and 10 and then show it multiplied by a power of 10.

For example	$1.234 \times 10^4$	$1.234 \times 10^{-4}$
This means	$1.234 \times 10 \times 10 \times 10 \times 10$	$1.234 \div 10 \div 10 \div 10 \div 10$
Which is	12340	0.0001234

Let's see some more examples.

0.523	=	$5.23 \times 10^{-1}$	(note that $\times 10^{-1}$ means divide 5.23 by 10)
52.3	=	$5.23 \times 10^1$	(note that $\times 10^1$ means multiply 5.23 by 10)
523	=	$5.23 \times 10^2$	(note that $\times 10^2$ means multiply 5.23 by 100)
5230	=	$5.23 \times 10^3$	(note that $\times 10^3$ means multiply 5.23 by 1000)
0.00523	=	$5.23 \times 10^{-3}$	(note that $\times 10^{-3}$ means divide 5.23 by 1000)

Note that the sign (positive or negative) in the index tells you whether you are dividing or multiplying; a positive number means you are multiplying and a negative number means you are dividing. The number tells you how many times you are either dividing or multiplying by 10. So  $1.60 \times 10^{-19}$  means take the number 1.60 and divide it by 10 nineteen times (divide by  $10^{19}$ ). A quick way to do this in your head is to move the decimal point 19 places to the left.

And to go back to our examples from above:-

$$1 \text{ pc} = 30\,900\,000\,000\,000\,000 \text{ m} = 3.09 \times 10^{16} \text{ m}$$

$$h = 0.000663 \text{ Js} = 6.63 \times 10^{-34} \text{ Js}$$

So this is a much shorter way of writing these numbers!

### Exercise:

To put a list of large numbers in order is difficult because it takes time to count the number of digits and hence determine the magnitude of the number.

1. Put these numbers in order of size,

5239824 , 25634897 , 5682147 , 86351473 , 1258964755 , 142586479 , 648523154

But it is easier to order large numbers when they are written in standard form.

2. Put these numbers in order of size,

$5.239 \times 10^6$  ,  $2.563 \times 10^7$  ,  $5.682 \times 10^6$  ,  $8.635 \times 10^7$  ,  $1.258 \times 10^9$  ,  $1.425 \times 10^8$  ,  $6.485 \times 10^8$

You can see that it is easier to work with large numbers written in standard form. To do this we must be able to convert from one form into the other.

3. Convert these numbers into normal form.

- a)  $5.239 \times 10^3$    b)  $4.543 \times 10^4$    c)  $9.382 \times 10^2$    d)  $6.665 \times 10^6$   
 e)  $1.951 \times 10^2$    f)  $1.905 \times 10^5$    g)  $6.005 \times 10^3$

4. Convert these numbers into standard form.

- a) 65345 (how many times do you multiply 6.5345 by 10 to get 65345 ?)  
 b) 28748                                  c) 548454                                  d) 486856  
 e) 70241                                  f) 65865758                                  g) 765

Standard form can also be used to write small numbers

e.g.    0.00056                  =             $5.6 \times 10^{-4}$

5. Convert these numbers into normal form.
- a)  $8.34 \times 10^{-3}$       b)  $2.541 \times 10^{-8}$       c)  $1.01 \times 10^{-5}$   
d)  $8.88 \times 10^{-1}$       e)  $9 \times 10^{-2}$       f)  $5.05 \times 10^{-9}$
6. Convert these numbers to standard form.
- a) 0.000567      b) 0.987      c) 0.0052  
d) 0.0000605      e) 0.008      f) 0.0040302
7. Calculate, giving answers in standard form,
- a)  $(3.45 \times 10^{-5} + 9.5 \times 10^{-6}) \div 0.0024$   
b)  $2.31 \times 10^5 \times 3.98 \times 10^{-3} + 0.0013$

## Chapter 4:

### Converting Units to SI Units

Some common non-SI units that you will encounter during Year 12 Physics:-

Quantity	Quantity	Alternative Unit	Unit Symbol	Value in SI Units
Energy	E	electron volt	eV	$1.6 \times 10^{-19}$ J
Charge	Q	charge on electron	e	$1.6 \times 10^{-19}$ C
Mass	m	atomic mass unit	u	$1.67 \times 10^{-27}$ J
Time	t	hour	hr	3600 s
Time	T	day	dy	$8.64 \times 10^4$ s
Time	t	year	yr	$3.16 \times 10^7$ s
Distance	d	light year	ly	$9.46 \times 10^{15}$ m

**It is essential that you recognise these units and also know how to change them to SI units and back again. A lot of marks can be lost if you are not absolutely competent doing this.**

When you are converting from these units to SI units you need to multiply by the value in the right hand column. When you convert back the other way you need to divide.

#### Example

The nearest star (other than the Sun) to Earth is Proxima Centauri at a distance of 4.24 light years.

What is this distance expressed in metres?

$$4.24 \text{ light years} = 4.24 \times 9.46 \times 10^{15} \text{ m} = 4.01 \times 10^{16} \text{ m}$$

What is this distance expressed in kilometres?

$$4.01 \times 10^{16} \text{ m} = 4.01 \times 10^{16} / 1000 \text{ km} = 4.01 \times 10^{13} \text{ km}$$

## Exercise

Convert the following quantities:-

1. What is 13.6 eV expressed in joules?
2. What is a charge of 6e expressed in coulombs?
3. An atom of Lead-208 has a mass of 207.9766521 u, convert this mass into kg.
4. It has been 47 years since England won the World Cup, how long is this in seconds?
5. A TV program lasts 2560 s, how many hours is this?
6. The semi-major axis of Pluto's orbit around the Sun is  $5.91 \times 10^{12}$  m, what is this distance in AU?

## Converting Speeds

Things get a little more complicated when you have to convert speeds. For example, if Usain Bolt runs at an average speed of  $10.4 \text{ ms}^{-1}$ , what is this speed in kilometres per hour?

First, we will change from  $\text{ms}^{-1}$  to  $\text{kms}^{-1}$ :-

$$10.4 \text{ ms}^{-1} = 10.4 / 1000 \text{ kms}^{-1} = 1.04 \times 10^{-2} \text{ kms}^{-1}$$

Now we have to change from  $\text{kms}^{-1}$  to  $\text{kmhr}^{-1}$

$$1.04 \times 10^{-2} \text{ kms}^{-1} = 1.04 \times 10^{-2} \times 3600 \text{ kmhr}^{-1} = 37.44 \text{ kmhr}^{-1}$$

Notice that in last line we had to multiply by the number of seconds in an hour. This is because you would go further in an hour than you would in a second. If you find this hard to understand sometimes you can multiply by the conversion factor and divide by it and see which value is sensible. Let's see what would have happened if we had divided by 3600:-

$$1.04 \times 10^{-2} \text{ kms}^{-1} = 1.04 \times 10^{-2} / 3600 \text{ kmhr}^{-1} = 2.89 \times 10^{-6} \text{ kmhr}^{-1}$$

Do you think Usain Bolt was running at a speed of about 2 millionths of a kilometre an hour? This is clearly wrong so we would have realised that we needed to multiply by 3600.

## Exercise

1. Convert  $0.023 \text{ kms}^{-1}$  into  $\text{ms}^{-1}$ .
2. Express  $3456 \text{ mhr}^{-1}$  into  $\text{kmhr}^{-1}$
3. What is  $30 \text{ kmhr}^{-1}$  in  $\text{ms}^{-1}$ ?
4. What is  $50 \text{ ms}^{-1}$  in  $\text{km hr}^{-1}$ ?
5. Convert  $33 \text{ kmhr}^{-1}$  into  $\text{ms}^{-1}$ .


## Chapter 5:

### Prefixes & Converting Unit Magnitudes

#### How to use and convert prefixes

Often in Physics, quantities are written using prefixes which is an even shorter way of writing numbers than standard form. For example instead of writing  $2.95 \times 10^{-9}$  m we can write 2.95 nm where n means nano and is a short way of writing  $\times 10^{-9}$ . Here is a table that shows all the prefixes you need to know in Year 12 Physics.

Prefix	Symbol	Name	Multiplier
pico	p	trillionth	$10^{-12}$
nano	n	billionth	$10^{-9}$
micro	$\mu$	millionth	$10^{-6}$
milli	m	thousandth	$10^{-3}$
centi	c	hundredth	$10^{-2}$
kilo	k	thousand	$10^3$
mega	M	million	$10^6$
giga	G	billion	$10^9$
tera	T	trillion	$10^{12}$



**Again, it is essential you know all of these to ensure that you don't lose easy marks when answering numerical problems. Make sure you spot the difference between the capital and lowercase letters.**

When you are given a variable with a prefix you must convert it into its numerical equivalent in standard form before you use it in an equation.

#### Example

Always start by replacing the prefix symbol with its equivalent multiplier.

For example:  $0.16 \mu\text{C} = 0.00000016\text{C} = 0.16 \times 10^{-6} \text{C}$

$$3 \text{ km} = 3000\text{m} = 3 \times 10^3 \text{ m}$$

$$10 \text{ ns} = 0.00000001 \text{ s} = 10 \times 10^{-9} \text{ s}$$

You might want to avoid taking these further into perfect standard form (for example:  $0.16 \times 10^{-6} \text{C}$  should actually be  $1.6 \times 10^{-7} \text{C}$  and also  $10 \times 10^{-9} \text{s} = 10^{-8} \text{s}$ ) unless you are absolutely confident that you will do it correctly. It is always safer to stop at the first step ( $10 \times 10^{-9} \text{s}$ ) and type it like this into your calculator.



## Exercise

1. Convert these into standard form.

- |                |                    |
|----------------|--------------------|
| a) 1.4 kW =    | b) 10 $\mu$ C =    |
| c) 24 cm =     | d) 340 MW =        |
| e) 46 pF =     | f) 0.03 mA =       |
| g) 52 Gbytes = | h) 43 k $\Omega$ = |

2. Convert the following: (Remember that milli =  $10^{-3}$  and centi =  $10^{-2}$ )

- a) 5.46 m to cm
- b) 65 mm to m
- c) 3 cm to m
- d) 0.98 m to mm
- e) 34 cm to mm
- f) 76 mm to cm

## Converting between unit magnitudes for areas and volumes

It's really important that when we convert areas and volumes that we don't forget to square or cube the unit.

Let's take the example of converting a sugar cube of volume  $1 \text{ cm}^3$  into  $\text{m}^3$ .

If we just use the normal conversion, then  $1 \text{ cm}^3 = 1 \times 10^{-2} \text{ m}^3 \leftarrow$  **Wrong Answer!**

STOP! Let's think about this one second:

Imagine in your head a box 1m by 1m by 1m, how many sugar cubes could you fit in there? A lot more than 100! That would only fill up one line along one of the bottom edges of the box! **So our answer must be wrong.**

What we have to do is do the conversion and then cube it, like this:-

$$1 \text{ cm}^3 = 1 (\times 10^{-2} \text{ m})^3 = 1 \times 10^{-6} \text{ m}^3.$$

So this means we could fit a million sugar cubes in the box, which is right.

## Exercise

- 1. What is  $5.2 \text{ mm}^3$  in  $\text{m}^3$ ?
- 2. What is  $24 \text{ cm}^2$  in  $\text{m}^2$ ?
- 3. What is  $34 \text{ m}^3$  in  $\mu\text{m}^3$ ?
- 4. What is  $0.96 \times 10^6 \text{ m}^2$  in  $\text{km}^2$ ?
- 5. Convert  $34 \text{ Mm}^3$  into  $\text{pm}^3$ .

## Chapter 6:

### Re-arranging Equations

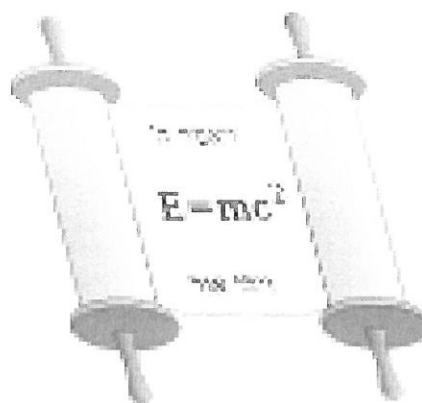
The first step in learning to manipulate an equation is your ability to see how it is done once and then repeat the process again and again until it becomes second nature to you.

In order to show the process once I will be using letters rather than physical units.

You can rearrange an equation  $a = b \times c$  with

$b$  as the subject  $b = \frac{a}{c}$

or  $c$  as the subject  $c = \frac{a}{b}$



### Example

Equation	First Rearrangement	Second Rearrangement
$v = f \times \lambda$	$f = \frac{v}{\lambda}$	$\lambda = \frac{v}{f}$
$T = \frac{1}{f}$	$1 = T \times f$	$f = \frac{1}{T}$

## Exercise

From now on the multiplication sign will not be shown, so  $a = b \times c$  will be simply written as  $a = bc$

Equation	First Rearrangement	Second Rearrangement
(Power of lens) $P = \frac{1}{f}$	$1 =$	$f =$
(Magnification of lens) $m = \frac{v}{u}$	$v =$	$u =$
(refractive index) $n = \frac{c}{v}$	$c =$	$v =$
(current) $I = \frac{\Delta Q}{\Delta t}$		
(electric potential) $V = \frac{\Delta E}{\Delta Q}$		
(power) $P = \frac{\Delta E}{\Delta t}$		
(power) $P = VI$		
(conductance) $G = \frac{I}{V}$		
(resistance) $R = \frac{V}{I}$		
(resistance) $R = \frac{1}{G}$		
(power) $P = I^2 R$		
(power) $P = \frac{V^2}{R}$		
(stress) $\sigma = \frac{F}{A}$	$F =$	$A =$
(strain) $\varepsilon = \frac{x}{l}$	$x =$	$l =$

## Exercise

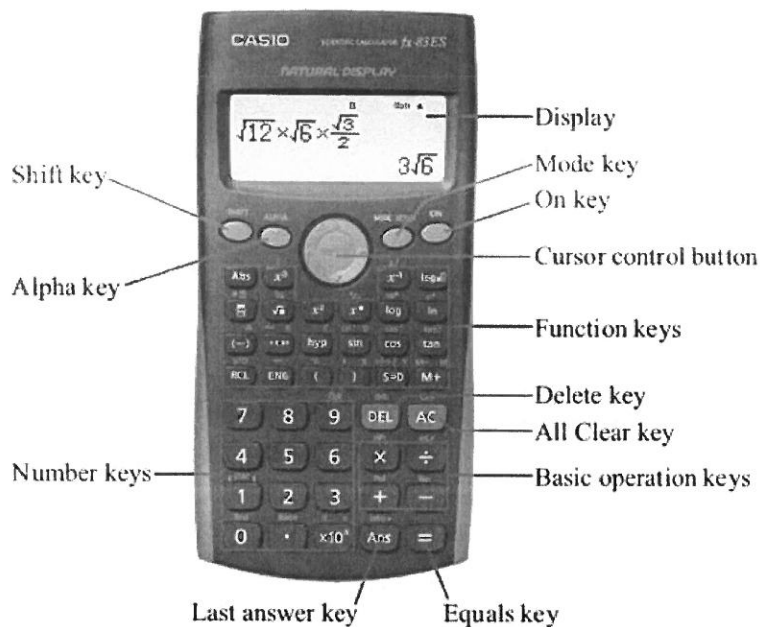
Further rearranging practice questions:

1.  $a = bc$              $b = ?$
2.  $a = b/c$              $b = ?$      $c = ?$
3.  $a = b - c$              $c = ?$
4.  $a = b + c$              $b = ?$
5.  $a = bc + d$              $c = ?$
6.  $a = b/c - d$              $c = ?$
7.  $a = bc/d$              $d = ?$      $b = ?$
8.  $a = (b + c)/d$              $c = ?$
9.  $a = b/c + d/e$              $e = ?$

## Chapter 7

### Using Your Calculator

In A Level Physics you will need to use a scientific calculator. We recommend a 'natural display' calculator such as the Casio fx-83ES model, shown here:



## Exercise

Using your calculator, evaluate:

$$\frac{30}{5 \times 3} = ?$$

What answer did you get? 18 or 2? If you got 18 you were wrong. Nope – there's nothing wrong with your calculator we just need to establish exactly how it works.

You need to be able to use your calculator confidently to do the following things:

- Fractions or decimals
- Powers and surds (i.e. square roots)
- Making corrections or reusing a previous result
- Using your calculator for negative numbers
- Using the calculator memory
- Using standard form on your calculator
- Trigonometry on your calculator
- Radians on your calculator
- Logarithms, Natural logarithms and powers of e on your calculator

If you are in any doubt about how to the things above on your calculator you should visit the Open University website and complete their 'Using a Scientific Calculator' module here:

<http://www.open.edu/openlearn/education/mathematics-education/using-scientific-calculator/content-section-0>

## Exercise

Always give your answer in standard form, e.g.  $7.0 \times 10^{-3}$  and not as  $7.0^{-3}$  or 7000 which is how it may be displayed on the calculator.

Your answer should have the same amount of significant figures as the question.

1.  $(7.5 \times 10^3) \times 24 =$

2.  $(6.2 \times 10^{-5}) \times (5.0 \times 10^{-3}) =$

3.  $(1.4 \times 10^5) \times (2.0 \times 10^4) =$

4.  $\frac{(4.5 \times 10^3)}{(7.0 \times 10^4)} =$

5.  $\frac{4.3 \times 10^{-6}}{6.0 \times 10^3} =$

## Exercise

In each case, find the value of “y”.

1.  $y = (7.5 \times 10^3)^2$

2.  $y = \frac{(1.3 \times 10^3) \times (1.6 \times 10^{-4})}{(6.6 \times 10^6) + (3.27 \times 10^{-3})}$

3.  $y = \frac{(5.6 \times 10^{-4})^2 \times (7.8 \times 10^8)}{(6.6 \times 10^6) + (3.27 \times 10^{-3})}$

4.  $y = \sqrt{\frac{(4.12 \times 10^3) + (6.5 \times 10^2)}{(2.3 \times 10^4) \times (8.1 \times 10^2)}}$

## Chapter 8

### Significant Figures

You can lose a mark if you quote too many significant figures in an answer, it is just as bad as leaving off a unit when answering a question –why lose marks needlessly when you don’t have to?

### The Rules

1. All non-zero digits are significant. E.g. **65290**, **5000**, **0.34** (numbers highlighted bold are significant)
2. In a number without a decimal point, only zeros BETWEEN non-zero digits are significant. E.g. the zeros are significant in **12001** but not in **12100**.
3. In a number with a decimal point, all zeros to the right of the right-most non-zero digit are significant. E.g. **12.100**, **2.010**, **3.01**, **0.0120**

### Examples

**39.389** → 5 s.f. (5 significant figures)

**1200000000000000** → 2 s.f.

**3400.000** → 7 s.f.

**34224000** → 5 s.f.

**200000.0004** → 10 s.f.

## Exercise

How many significant figures are the following numbers quoted to?

1. 224.4343
2. 0.00000000003244654
3. 3442.34
4. 200000
5. 43.0002
6. 24540000
7. 543325
8. 23.5454353
9. 4.0000000000
10. 4456001

For the numbers above that are quoted to more than 3 s.f., convert the number to standard form and quote to 3 s.f.

## Using a Reasonable Number of S.F.

When answering a question you should write your final answer using the same number of s.f. as those provided in the question. You can sometimes go to just one more.

### Example

Let's say we were faced with this question:

*A man runs 110 metres in 13 seconds, calculate his average speed.*

Distance = 110 m

Time = 13 s

Speed = Distance/Time = 110 metres / 13 seconds

= 8.461538461538461538461538461538 ms<sup>-1</sup>

**This is a ridiculous number of significant figures!**

= 8.46 ms<sup>-1</sup> seems acceptable (i.e. given to 3 s.f.) because the figures we were given in the question we given to 2 s.f. We've used just one more than was given in our question which is fine.

## Exercise

How many significant figures would you quote the answers to the following questions to?

1. The resultant force on a body of mass 4.0 kg is 20 N. What is the acceleration of the body?
2. A particle which is moving in a straight line with a velocity of  $15 \text{ ms}^{-1}$  accelerates uniformly for 3.0s, increasing its velocity to  $45 \text{ ms}^{-1}$ . What distance does it travel whilst accelerating?
3. A car moving at  $30 \text{ ms}^{-1}$  is brought to rest with a constant retardation of  $3.6 \text{ ms}^{-2}$ . How far does it travel whilst coming to rest?
4. A man of mass 75 kg climbs 300 m in 30 minutes. At what rate is he working?
5. What is the maximum speed at which a car can travel along a level road when its engine is developing 24kW and there is a resistance to motion of 800 N?

## Chapter 9

### Example Numerical Problems

#### A Step by Step Guide on Tackling a Numerical Problem

This example may look lengthy, but that's because I am describing every step that I do in my head.

**Only the yellow shaded bits will end up written down on my paper.**

Let's try a typical question from a worksheet given out in class:

The question says:

*Gravitational field strength ( $g$ ) =  $9.81 \text{ Nkg}^{-1}$*

*2. A book is picked up from the floor by a librarian and placed onto a shelf 2.5 m high. The book has a mass of 500 g. Calculate:*

*(a) The energy gained by the book.*

**Step 1:** Write down the values of everything you are given and put a question mark next to what you are asked to work out:

$$g = 9.81 \text{ Nkg}^{-1}$$

$$h = 2.5 \text{ m}$$

$$m = 500 \text{ g}$$

$$E = ?$$



**Step 2:** Convert all the values into SI units i.e. time in seconds, distances in metres and so on:

From the table on page 11:

$$1 \text{ kg} = 10^3 \text{ g}$$

So now replace 500 g with  $500/10^3$  kg:

$$g = 9.81 \text{ Nkg}^{-1}$$

$$h = 2.5 \text{ m}$$

$$m = 500 \text{ g} = 0.5 \text{ kg}$$

$$E = ?$$

So our list of known values becomes:

$$\begin{aligned} g &= 9.81 \text{ Nkg}^{-1} \\ h &= 2.5 \text{ m} \\ m &= 500 \text{ g} = 0.5 \text{ kg} \\ E &= ? \end{aligned}$$

**WRITE THIS DOWN**

**Step 3:** Pick an equation that contains the values we know and the quantity we are trying to work out:

So we want an equation with m, g, h and E in it. This looks like a job for the gravitational potential energy equation:

$$E = m \times g \times h$$

**Step 4:** Re-arrange the equation so what we are trying to work out is the subject.

We got lucky this time, the thing we are trying work out is the Energy, E, and that is already the subject, so no re-arranging to do!

**Step 5:** Insert the values into the equation including the units:

$$E = m \times g \times h = 0.5 \text{ kg} \times 9.81 \text{ Nkg}^{-1} \times 2.5 \text{ m}$$

**WRITE THIS  
DOWN**

**Step 6:** Type it into our calculator to get the answer and quote the answer to a reasonable number of significant figures:

Answer in the calculator:

$$E = 12.2625$$

The value g was quoted to 3 significant figures and the value of h was given to 2 s.f. However the value for m appeared to be only quoted to 1 s.f. but it's not clear whether this actually was actually to 3 s.f. or if it was indeed rounded to only 1 s.f. In this case quoting our answer to either 2 or 3 significant figures seems reasonable, and both would be given a mark in the exam.

$$E = 12.2 \text{ J (3 s.f.)}$$

**WRITE THIS DOWN**

Make sure you remember to put the unit as well. Energy is measured in Joules (J).

**Step 7:** *Pause for one moment and think about if our answer is sensible.*

This comes with practice and experience. The first time I tried this calculation out I got an answer of  $1.226 \times 10^4$  J. I know that a typical car on a motorway has a kinetic energy of around  $10^5$  J and it is (hopefully) clear that lifting a book 2.5 m off the floor should require much less energy than that, so clearly I went wrong somewhere.

Looking back over my working, I could see that I had accidentally used a value of 500 for the mass,  $m$ , instead of the correct value of 0.5 – I had forgotten to convert grams into kilograms in step 2.

After a few practice questions, you can do the same and in the exam it is reassuring when you calculate an answer and know that it looks about right.

## General Information

### Useful Web Links

These are general links which you may find useful for revision and independent study during the AS and A2 courses.

[http://www.thestudentroom.co.uk/wiki/Physics\\_Websites](http://www.thestudentroom.co.uk/wiki/Physics_Websites)

<http://www.thestudentroom.co.uk/forumdisplay.php?f=131>

<http://www.khanacademy.org/#Physics>

<http://www.s-cool.co.uk/a-level/physics>

<http://www.physicsclassroom.com/>

<http://www.school-for-champions.com/physics.htm>

<http://www.cyberphysics.co.uk/index.html>

<http://jersey.uoregon.edu/vlab/>

### Textbooks and revision guides

Within the first couple of days of term you should go to the Library and collect an AS Physics textbook. This book is a detailed guide to the course and it will be yours to look after for the whole of Year 12. The textbook should be brought to every lesson.

Should you wish to purchase a revision guide in addition to the course textbook we will be looking at organising a bulk order at some point in the Autumn term which will normally be at a discount to typical store prices. We do not consider a revision guide a requirement for the course, however, and it will not be needed in lessons.

## 6. Exam Technique

It is vital that you are able to communicate a numerical answer appropriately to an examiner.

Students will often make these mistakes in questions that involve calculations:

- Copying values or equations incorrectly from the question or the data sheet.
- Mistakes when rearranging formulae.
- Ignoring prefixes to units.
- Inputting into calculator wrong, especially standard form and accurate use of brackets.
- Having the calculator in the wrong mode (radians/degrees)
- If asked for, not writing final answer to the correct number of significant figures or writing the unit.
- Writing down a value which would be silly in the context of the question.
- Messy working that is difficult to decipher.

### A method for numerical questions

#### Example question:

Calculate the wavelength of a quantum of electromagnetic radiation with energy of 1.99 J.

#### Data sheet:

Speed of electromagnetic radiation in free space,  
 $c = 3.00 \times 10^8 \text{ m s}^{-1}$   
Planck's constant,  $h = 6.63 \times 10^{-34} \text{ J s}$

- (1) Write down the values of everything you are given.
- (2) Convert all the values into SI units (e.g. put time into seconds, distance in meters...) and replace unit prefixes with their equivalent values in standard form.
- (3) Pick the equation you need. If you need to find it on the data sheet, look for one that contains the quantities you know and the quantity you are trying to work out.
- (4) Rearrange the formula so the quantity you want is the subject of the equation.
- (5) Insert the values into your equation, taking care to lay out your working clearly
- (6) Use your calculator to accurately input the numbers to find the solution.
- (7) Write down the answer to more decimal places than you need at first, in case you need the value for later calculations. Check the answer seems sensible. In this example I got a massive wavelength the first time because I mistyped the energy as  $0.199 \times 10^{12} \text{ J}$ .
- (8) Write your final answer and underline it. All the input values were to 3 s.f., so the answer should be written to the same precision.

$$c = 3.00 \times 10^8 \text{ ms}^{-1}$$

$$h = 6.63 \times 10^{-34} \text{ Js}$$

$$E = 0.199 \text{ pJ}$$

$$= 0.199 \times 10^{-12} \text{ J}$$

$$\lambda = ?$$

$$E = \frac{hc}{\lambda}$$

$$\lambda = \frac{hc}{E}$$

$$= \frac{6.63 \times 10^{-34} \text{ Js} \times 3.00 \times 10^8 \text{ ms}^{-1}}{0.199 \times 10^{-12} \text{ J}}$$

$$= \underline{9.9949 \times 10^{11} \text{ m}}$$

$$= \underline{9.99 \times 10^{13} \text{ m to 3 s.f.}}$$