

ANSWERS

Please check the examination details below before entering your candidate information

Candidate surname					Other names				
Centre Number					Candidate Number				
Pearson Edexcel Level 1/Level 2 GCSE (9–1)									
Monday 12 November 2018									
Morning (Time: 1 hour 30 minutes)					Paper Reference 1MA1/3F				
Mathematics Paper 3 (Calculator) Foundation Tier									
You must have: Ruler graduated in centimetres and millimetres, protractor, pair of compasses, pen, HB pencil, eraser, calculator. Tracing paper may be used.								Total Marks	

Instructions

- Use **black** ink or ball-point pen.
- **Fill in the boxes** at the top of this page with your name, centre number and candidate number.
- Answer **all** questions.
- Answer the questions in the spaces provided – *there may be more space than you need.*
- You must **show all your working**.
- Diagrams are **NOT** accurately drawn, unless otherwise indicated.
- **Calculators may be used.**
- If your calculator does not have a π button, take the value of π to be 3.142 unless the question instructs otherwise.



Information

- The total mark for this paper is 80
- The marks for **each** question are shown in brackets – *use this as a guide as to how much time to spend on each question.*

Advice


- Read each question carefully before you start to answer it.
- Keep an eye on the time.
- Try to answer every question.
- Check your answers if you have time at the end.

Turn over ►

P55596A

©2018 Pearson Education Ltd.

6/7/17/1/1




Pearson

Answer ALL questions.

Write your answers in the spaces provided.

You must write down all the stages in your working.

1 Write a number in each box to make the calculation correct.

(i) $56.3 + \boxed{43.7} = 100$

(1)

(ii) $\frac{2}{7} + \boxed{\frac{5}{7}} = 1$

(1)

(Total for Question 1 is 2 marks)

2 Write 3% as a fraction.

$\frac{3}{100}$

(Total for Question 2 is 1 mark)

3 Find $\sqrt{1.44}$

1.2

(Total for Question 3 is 1 mark)

4 Work out $\frac{1}{8}$ of 720

90

(Total for Question 4 is 1 mark)

DO NOT WRITE IN THIS AREA

DO NOT WRITE IN THIS AREA

DO NOT WRITE IN THIS AREA

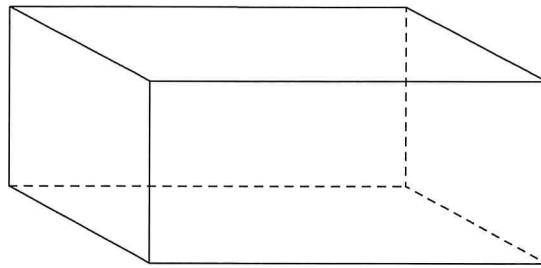


DO NOT WRITE IN THIS AREA

DO NOT WRITE IN THIS AREA

DO NOT WRITE IN THIS AREA

5 Here is a 3-D shape.



(a) Write down the name of this 3-D shape.

CUBOID

(1)

(b) Write down the number of edges of this 3-D shape.

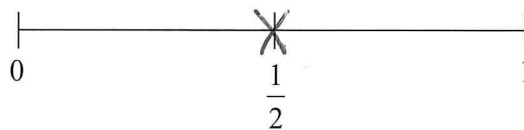
12

(1)

(Total for Question 5 is 2 marks)

6 An ordinary fair dice is thrown once.

(a) On the probability scale below, mark with a cross (×) the probability that the dice lands on an odd number.



(1)

(b) Write down the probability that the dice lands on a number greater than 4

5 or 6.

2/6

(1)

(Total for Question 6 is 2 marks)



7 Shaun is 1.88m tall. 188cm ,

David is 6 cm taller than Shaun.

How tall is David?

(or 1.94m) 194cm

(Total for Question 7 is 2 marks)

8 2 pens cost £2.38
5 folders cost £5.60

Ben wants to buy 20 pens and 20 folders.
He only has £50

Does Ben have enough money to buy 20 pens and 20 folders?
You must show how you get your answer.

$$£2.38 \times 10 = £23.80$$

$$£5.60 \times 4 = £22.40$$

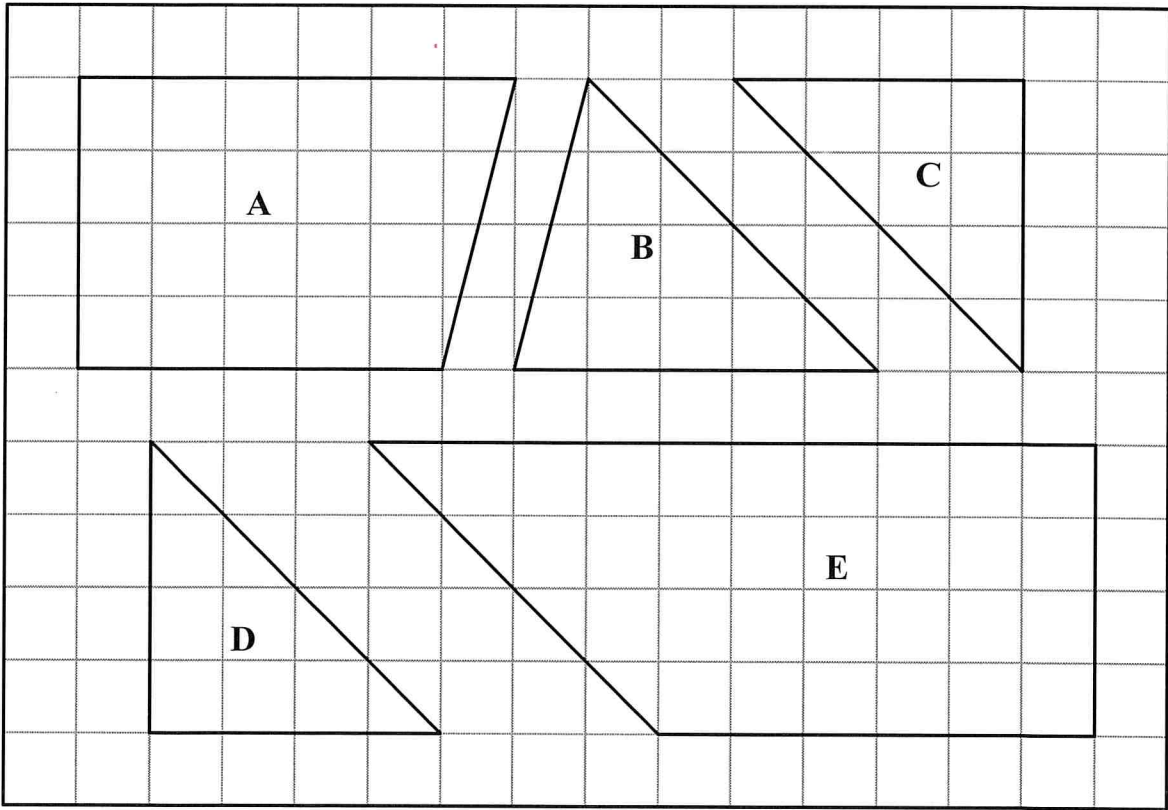
$$£46.20$$

BEN HAS ENOUGH WITH £50.

(Total for Question 8 is 4 marks)



- 9 The diagram shows five shapes on a centimetre grid.



- (a) Write down the name of shape E.

TRAPEZIUM
(1)

Two of the shapes are congruent.

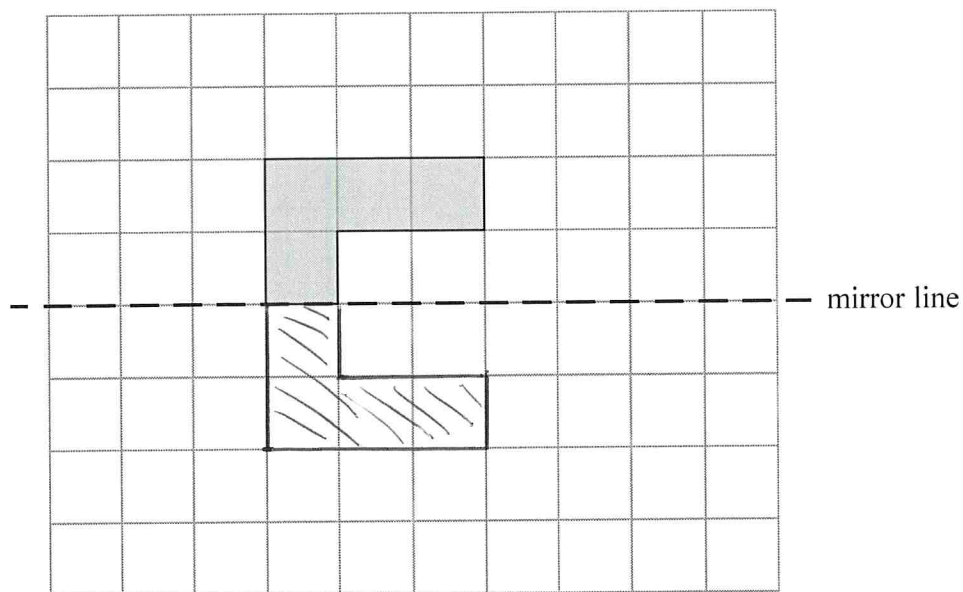
- (b) Write down the letters of these two shapes.

C and D
(1)

(Total for Question 9 is 2 marks)



10 On the grid, reflect the shaded shape in the mirror line.



(Total for Question 10 is 1 mark)

11 There are men and women at a meeting.

There are 28 women.

30% of the people at the meeting are men.

Work out the total number of people at the meeting.

$$70\% \text{ ARE WOMEN} = 28$$

$$0.70 \times \text{NUMBER OF PEOPLE} = 28$$

$$\therefore \text{NUMBER OF PEOPLE} = \frac{28}{0.7} = 40.$$

40

(Total for Question 11 is 3 marks)



DO NOT WRITE IN THIS AREA

DO NOT WRITE IN THIS AREA

DO NOT WRITE IN THIS AREA

12 Joan asked each of 60 people to name their favourite vegetable.

Here are her results.

Vegetable	Frequency
Peas	24
Carrots	16
Mushrooms	20

DEGREES
144
96
120

Draw an accurate pie chart for her results.

60 (x6) 360



(Total for Question 12 is 3 marks)



13 Annie sold

45 books at £1.20 each	$45 \times £1.20 = £54$
34 candles at £1.50 each	$34 \times £1.50 = £51$
some calendars at 90p each	$£0.90$
	<hr/>
	£105

She got a total of £150

Work out how many calendars Annie sold.

$$£150 - £105 = £45 \text{ ON CALENDARS}$$

$$\text{NUMBER OF CALENDARS} = \frac{45}{0.90} = 50$$

50

(Total for Question 13 is 4 marks)

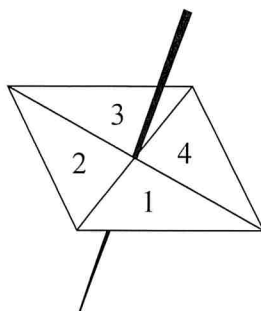
DO NOT WRITE IN THIS AREA

DO NOT WRITE IN THIS AREA

DO NOT WRITE IN THIS AREA



14 Here is a 4-sided spinner.



The table shows the probabilities that when the spinner is spun it will land on 1, on 3 and on 4

Number	1	2	3	4
Probability	0.2	0.3	0.4	0.1

The spinner is spun once.

(a) Work out the probability that the spinner will land on 2

$$0.2 + 0.4 + 0.1 = 0.7$$

$$1 - 0.7 = 0.3$$

0.3

(1)

(b) Which number is the spinner least likely to land on?

4

(1)

Jake is going to spin the spinner 60 times.

(c) Work out an estimate for the number of times the spinner will land on 1

$$0.2 \times 60 = 12$$

12

(2)

(Total for Question 14 is 4 marks)



- 15 Bert has 100 cards.
There is a whole number from 1 to 100 on each card.
No cards have the same number.

Bert puts a star on every card that has a multiple of 3 on it.
He puts a circle on every card that has a multiple of 5 on it.

Work out how many cards have both a star and a circle on them.

$$3 \times 5 = 15$$

15, 30, 45, 60, 75, 90

6

(Total for Question 15 is 3 marks)

- 16 Write down the ratio of 450 grams to 15 grams.
Give your answer in its simplest form.

$$450 : 15$$

$$90 : 3$$

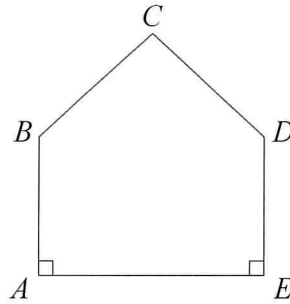
$$30 : 1$$

30 : 1

(Total for Question 16 is 2 marks)



- 17 The diagram shows a pentagon.
The pentagon has one line of symmetry.



$$AE = 4x$$

$$AB = 2x + 1$$

$$BC = x + 2$$

All these measurements are given in centimetres.

The perimeter of the pentagon is 18 cm.

- (a) Show that $10x + 6 = 18$

$$\begin{aligned} \text{PERIMETER} &= 4x + 2x + 1 + 2x + 1 + x + 2 + x + 2 \\ &= 10x + 6 = 18 \end{aligned}$$

(3)

- (b) Find the value of x .

$$10x = 12$$

$$x = 1.2$$

$$x = \underline{1.2 \text{ cm}}$$

(2)

(Total for Question 17 is 5 marks)



18 Trevor buys a boat.

The cost of the boat is £14 200 plus VAT at 20%

Trevor pays a deposit of £5000

He pays the rest of the cost in 10 equal payments.

Work out the amount of each of the 10 payments.

$$14200 \times 1.2 = \pounds 17040,$$

$$17040 - 5000 = \pounds 12040.$$

$$\frac{12040}{10} = \pounds 1204.$$

£ 1204

(Total for Question 18 is 4 marks)

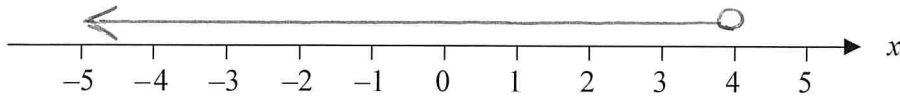


DO NOT WRITE IN THIS AREA

DO NOT WRITE IN THIS AREA

DO NOT WRITE IN THIS AREA

19 (a) On the number line, show the inequality $x < 4$



(2)

$3 < y \leq 7$ where y is an integer.

(b) Write down all the possible values of y .

4, 5, 6, 7

 (2)

(c) Solve $3x + 5 \geq x + 17$

$$(-1) (-5) (-x) (-5)$$

$$2x \geq 12$$

$$x \geq 6$$

$x \geq 6$

 (3)

(Total for Question 19 is 7 marks)



DO NOT WRITE IN THIS AREA

DO NOT WRITE IN THIS AREA

DO NOT WRITE IN THIS AREA

20 (a) Write 7357 correct to 3 significant figures.

7360
(1)

(b) Work out $\frac{\sqrt{17 + 4^2}}{7.3^2}$

Write down all the figures on your calculator display.

0.107798135
(2)

(Total for Question 20 is 3 marks)

21 Last year Jo paid £245 for her car insurance.
This year she has to pay £883 for her car insurance.

Work out the percentage increase in the cost of her car insurance.

$$883 - 245 = 638$$

$$\frac{638}{245} \times 100 = 260.4\%$$

260.4 %
(260 - 260.5)
(Total for Question 21 is 3 marks)



DO NOT WRITE IN THIS AREA

DO NOT WRITE IN THIS AREA

DO NOT WRITE IN THIS AREA

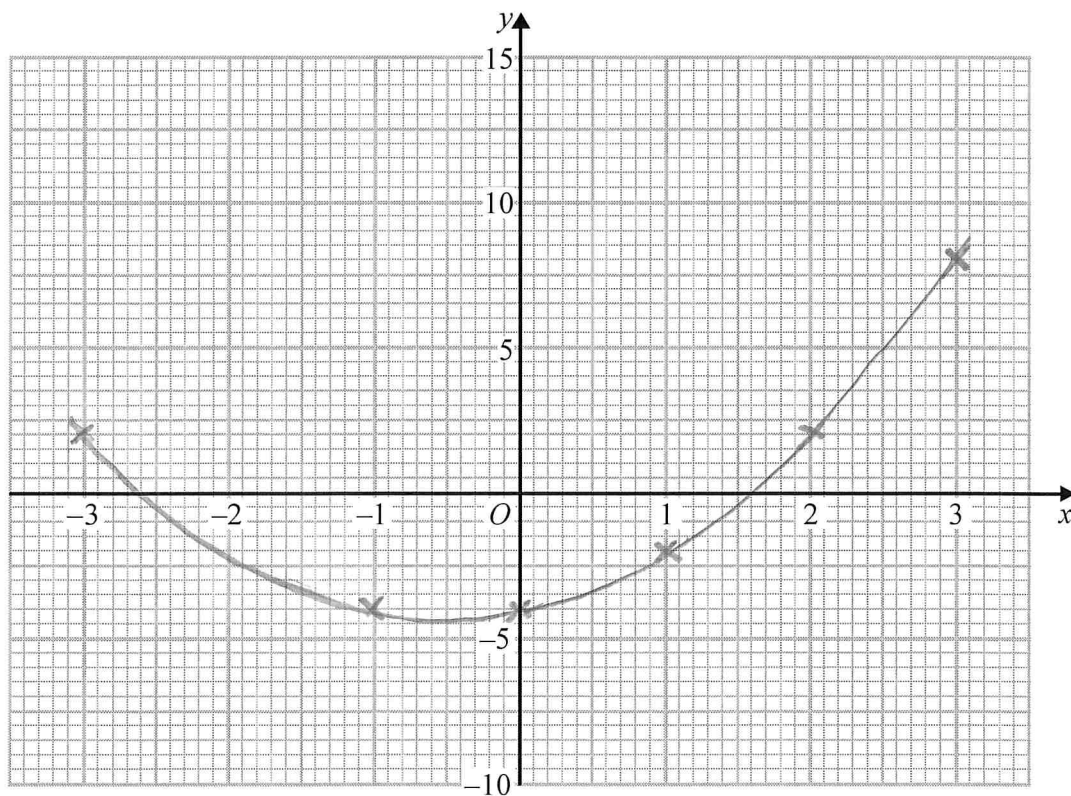
22 (a) Complete this table of values for $y = x^2 + x - 4$

x	-3	-2	-1	0	1	2	3
y	2	-2	-4	-4	-2	2	8

$$\begin{aligned} (-3)^2 + (-3) - 4 \\ = 9 - 3 - 4 \\ = 2 \end{aligned}$$

(2)

(b) On the grid, draw the graph of $y = x^2 + x - 4$ for values of x from -3 to 3



(2)

(c) Use the graph to estimate a solution to $x^2 + x - 4 = 0$

$$x = -2.6 \text{ or } 1.6$$

(HAS TO BE THREE VALUES)

(1)

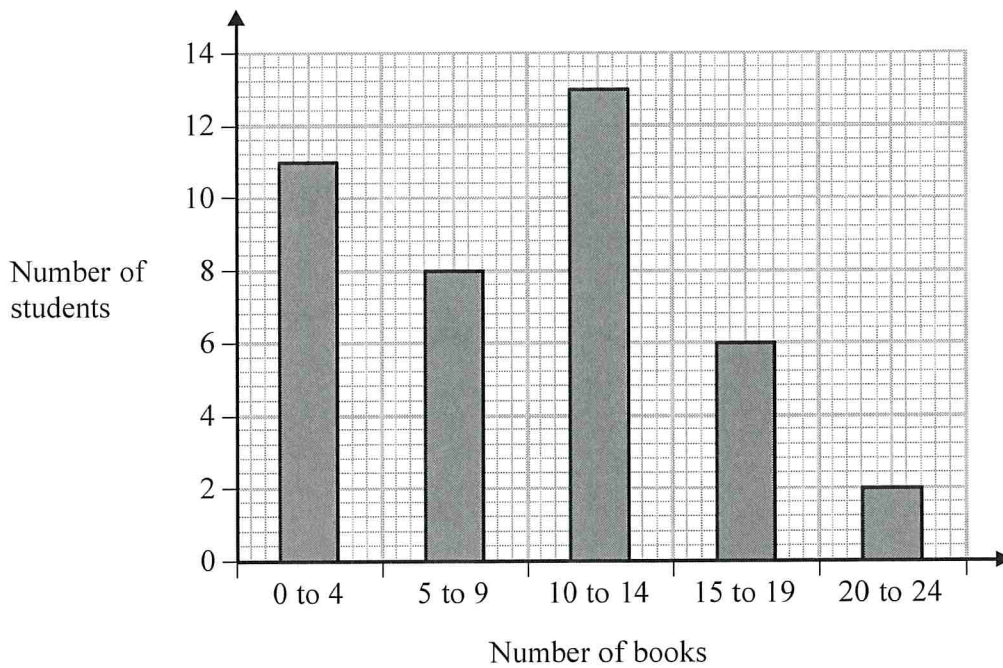
(Total for Question 22 is 5 marks)



P 5 5 5 9 6 A 0 1 5 2 0

23 Fran asks each of 40 students how many books they bought last year.

The chart below shows information about the number of books bought by each of the 40 students.



(a) Work out the percentage of these students who bought 20 or more books.

$$\frac{2}{40} \times 100$$

$$\frac{5}{(2)} \%$$



- (b) Show that an estimate for the mean number of books bought is 9.5
You must show all your working.

NO. OF BOOKS	FREQUENCY	MIDPOINT \times FREQ.
0 - 4	11	$2 \times 11 = 22$
5 - 9	8	$7 \times 8 = 56$
10 - 14	13	$12 \times 13 = 156$
15 - 19	6	$17 \times 6 = 102$
20 - 24	2	$22 \times 2 = 44$
	<u>40</u>	<u>380</u>

$$380 \div 40 = \underline{\underline{9.5}}$$

(4)

(Total for Question 23 is 6 marks)



24 Lara is a skier.

She completed a ski race in 1 minute 54 seconds.
The race was 475 m in length.

Lara assumes that her average speed is the same for each race.

- (a) Using this assumption, work out how long Lara should take to complete a 700 m race.
Give your answer in minutes and seconds.

$$54 \text{ SECONDS} = \frac{54}{60} = 0.9 \text{ MINUTES} \therefore \text{TIME} = 1.9 \text{ MINUTES}$$

$$\text{SPEED} = \frac{475}{1.9} = 250 \text{ m/min}$$

$$\text{TIME FOR 700m RACE} = \frac{700}{250} = 2.8 \text{ MINUTES}$$

$$0.8 \text{ MINUTES} = 0.8 \times 60 = 48 \text{ SECONDS}$$

$$\therefore \text{TIME} = 2 \text{ MINUTES } 48 \text{ SECONDS}$$

2 minutes 48 seconds
(3)

Lara's average speed actually increases the further she goes.

- (b) How does this affect your answer to part (a)?

REDUCES TIME TAKEN

(1)

(Total for Question 24 is 4 marks)

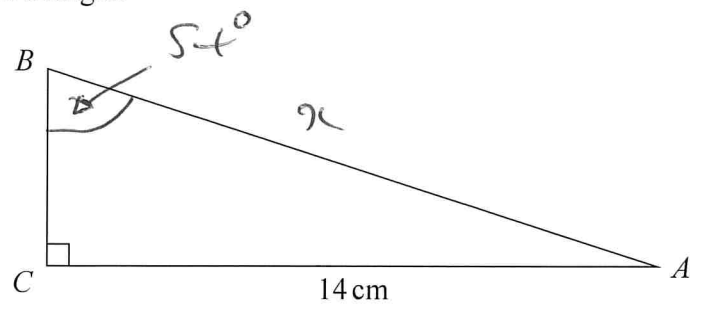


DO NOT WRITE IN THIS AREA

DO NOT WRITE IN THIS AREA

DO NOT WRITE IN THIS AREA

25 ABC is a right-angled triangle.



$AC = 14\text{ cm}$.
Angle $C = 90^\circ$

size of angle B : size of angle $A = 3 : 2$

Work out the length of AB .
Give your answer correct to 3 significant figures.

$3 : 2$ 5
 54° 36
 ~~27~~ 90 $2 \times 14 = 28$

$$\sin 54 = \frac{14}{x}$$

$$\therefore x = \frac{14}{\sin 54} = 17.3$$

..... 17.3 cm

(Total for Question 25 is 4 marks)



26 Here are the first four terms of an arithmetic sequence.

$$5 \xrightarrow{+6} 11 \xrightarrow{+6} 17 \xrightarrow{+6} 23$$

Write down an expression, in terms of n , for the n th term of the sequence.

$$6n - 1$$

(Total for Question 26 is 2 marks)

TOTAL FOR PAPER IS 80 MARKS

DO NOT WRITE IN THIS AREA

DO NOT WRITE IN THIS AREA

DO NOT WRITE IN THIS AREA

