

Please write clearly in block capitals.

Centre number

--	--	--	--	--

Candidate number

--	--	--	--

Surname

Forename(s)

Candidate signature

GCSE MATHEMATICS

F

Foundation Tier Paper 3 Calculator

Tuesday 13 June 2017


Morning

Time allowed: 1 hour 30 minutes

Materials

For this paper you must have:

- a calculator
- mathematical instruments.



Instructions

- Use black ink or black ball-point pen. Draw diagrams in pencil.
- Answer **all** questions.
- You must answer the questions in the spaces provided. Do not write outside the box around each page or on blank pages.
- Do all rough work in this book. Cross through any work you do not want to be marked.

Information

- The marks for questions are shown in brackets.
- The maximum mark for this paper is 80.
- You may ask for more answer paper, graph paper and tracing paper. These must be tagged securely to this answer book.

For Examiner's Use	
Pages	Mark
2–3	
4–5	
6–7	
8–9	
10–11	
12–13	
14–15	
16–17	
18–19	
20–21	
22–23	
24–25	
TOTAL	

Advice

- In all calculations, show clearly how you work out your answer.



Answer **all** questions in the spaces provided

1 Circle the lowest of these temperatures.

[1 mark]

-4.9°C

0°C

-7°C

0.1°C

2 Circle the expression that is four times bigger than n .

[1 mark]

$n + 4$

$4n$

$\frac{n}{4}$

n^4

3 Circle the fraction **greater** than $\frac{3}{10}$

[1 mark]

$\frac{1}{3}$

$\frac{3}{11}$

$\frac{4}{15}$

$\frac{29}{100}$



4 Circle the value of 2^5

[1 mark]

10

25

32

64

5 (a) Simplify $a \times a \times a + b + b$

[2 marks]

Answer _____

5 (b) Simplify $5(x + 3) - x + 2$

[3 marks]

Answer _____

Turn over for the next question



- 6** Twelve cards numbered 1 to 12 are put into six pairs.
Each pair has a total.

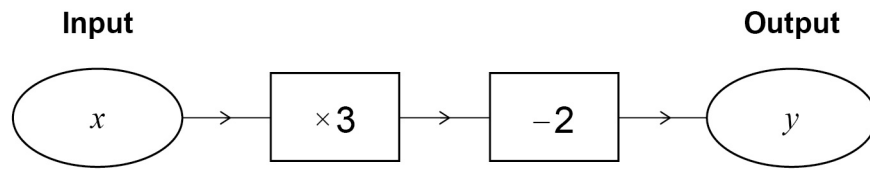
Complete the table to show the pairs and their totals.

[4 marks]

Cards	Total
1 and 2	3
_____ and _____	9
_____ and _____	11
_____ and _____	14
_____ and _____	19
_____ and _____	22



7 Here is a number machine.



7 (a) Work out the output when the input is 4

[1 mark]

Answer _____

7 (b) Work out the output when the input is -4

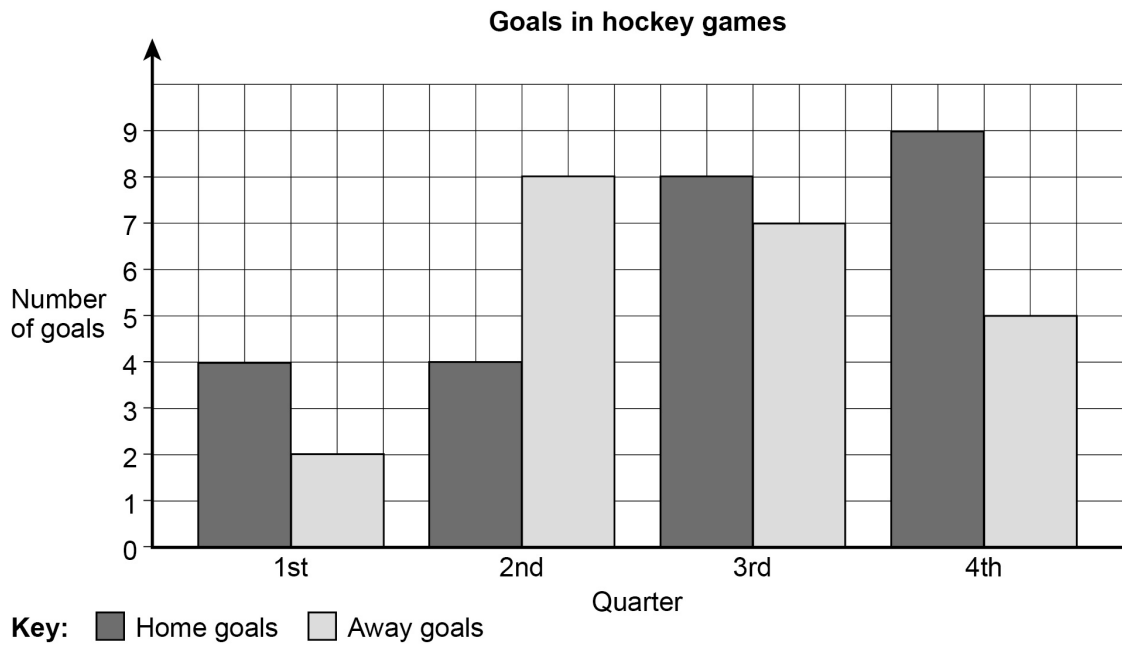
[1 mark]

Answer _____

Turn over for the next question



- 8** Here is information about the goals scored in some hockey games.
Each game has four quarters.



- 8 (a)** Which quarter was the mode for **away** goals?
Circle your answer.

[1 mark]

1st 2nd 3rd 4th

- 8 (b)** There were 10 games.
Work out the mean number of goals per game.

[2 marks]

Answer _____



8 (c) In total, how many **more** home goals were scored than away goals?

[2 marks]

Answer _____

8 (d) Rob says,

“More home teams **must** have won because there were more home goals.”

Is he correct?

Give a reason for your answer.

[1 mark]



9 (a) List **all** the factors of 30

[2 marks]

Answer _____

9 (b) A factor of 30 is chosen at random.

What is the probability that it is a 2-digit number?

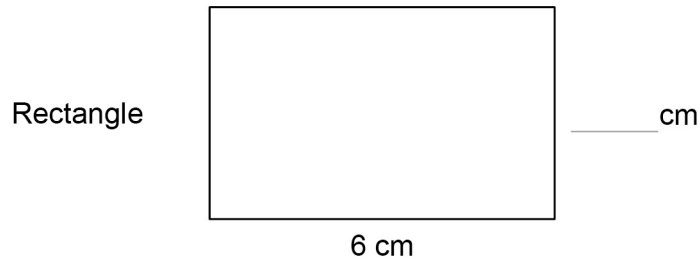
[1 mark]

Answer _____

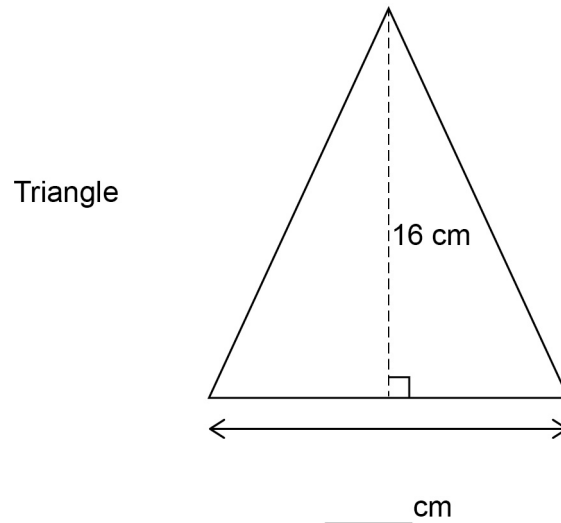


- 10 Each shape below has an area of 24 cm^2
Complete the missing lengths.

[3 marks]



Not drawn
accurately



Turn over for the next question

Turn over ►



11 A television channel shows 12 minutes of adverts in each half hour.

How many **minutes** of adverts does it show from 5 am to 11 pm?

[3 marks]

Answer _____ minutes

12 Put these probabilities in order, starting with the least likely.

44%

$\frac{1}{4}$

0.404

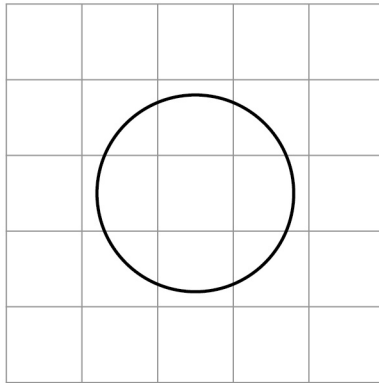
$\frac{4}{10}$

[2 marks]

Answer _____ , _____ , _____ , _____



- 13** A circle is drawn on a centimetre grid.



- 13 (a)** Draw a tangent to the circle.

[1 mark]

- 13 (b)** Grace works out that the area of the circle is more than 9 cm^2

Why must this be wrong?


[1 mark]

Turn over for the next question

Turn over ►



- 14 (a)** The front elevation, side elevation and plan of a solid are all the same, as shown.




Write down the name of the solid.

[1 mark]

Answer _____

- 14 (b)** The front elevation, side elevation and plan of a solid are all the same, as shown.



Write down the name of the solid.

[1 mark]

Answer _____



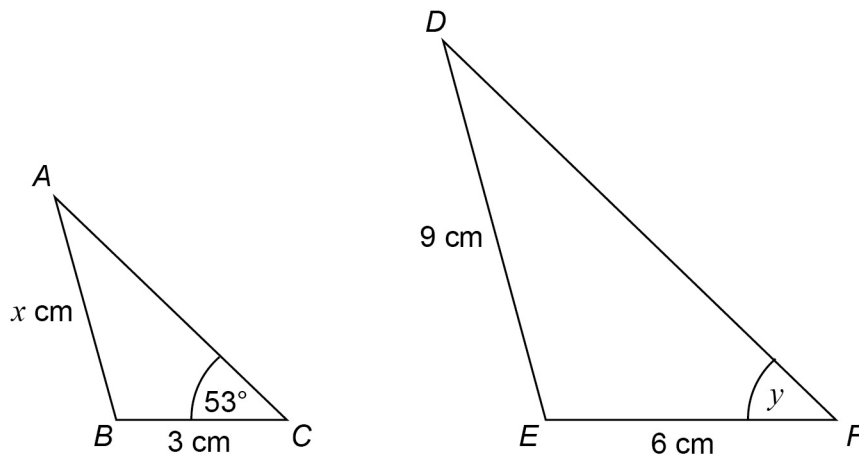
15

Show that there are **exactly** five 3-digit cube numbers.**[3 marks]**

Turn over for the next question**5****Turn over ►**

16 Triangles ABC and DEF are similar.

Not drawn
accurately



16 (a) Work out the value of x .

[2 marks]

Answer _____

16 (b) Write down the size of angle y .

[1 mark]

Answer _____ degrees

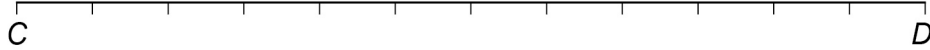


17 CD and PQ are lines of length 12 cm

17 (a) $CE : CD = 1 : 2$

Mark point E on the line with a cross.

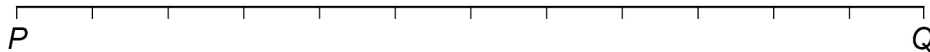
[1 mark]



17 (b) $PR : RQ = 1 : 3$

Mark point R on the line with a cross.

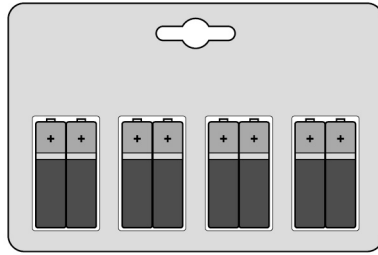
[1 mark]



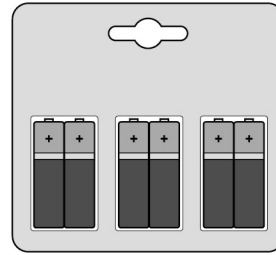
Turn over for the next question



18 A shop sells two brands of battery.



Brand A
Pack of 8
Price £3.60



Brand B
Pack of 6
Price £2.94

One brand A battery powers a toy for 5 hours.

One brand B battery powers the same toy for $5\frac{1}{2}$ hours.

Which brand is better value?

You **must** show your working.

[5 marks]

Answer _____



- 19** The value of x can be 2 or 5
The value of y can be 3 or 12

- 19 (a)** List the possible values of xy

[2 marks]

Answer _____

- 19 (b)** Work out the **least** possible value of $\frac{x-y}{x}$

You **must** show your working.

[2 marks]

Answer _____

Turn over for the next question



20

An exam has two papers.

Anil scores

33 out of 60 on paper 1

and

75 out of 100 on paper 2

Work out his percentage score for the exam.

[3 marks]

Answer _____ %



21

Purple paint is made by mixing red paint and blue paint in the ratio 5 : 2

Yan has 30 litres of red paint and 9 litres of blue paint.

What is the **maximum** amount of purple paint he can make?

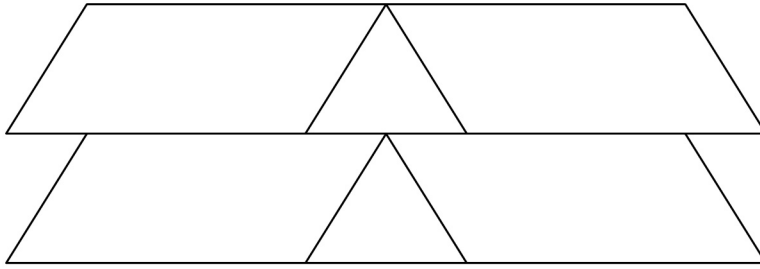
[3 marks]

Answer _____ litres

Turn over for the next question

Turn over ►

- 22** This shape is made from two triangles and four congruent parallelograms.



Not drawn
accurately

For each statement, tick the correct box.

- 22 (a)** The triangles are equilateral.

[1 mark]

Must be true

Could be true

Must be false

- 22 (b)** The triangles are congruent.

[1 mark]

Must be true

Could be true

Must be false



23 (a) The length of a pipe is 6 metres to the nearest metre.

Complete the error interval for the length of the pipe.

[2 marks]

Answer _____ m \leq length < _____ m

23 (b) The length of a different pipe is 4 metres to the nearest metre.

Olly says,

“The total length of the two pipes is 11 metres to the nearest metre.”

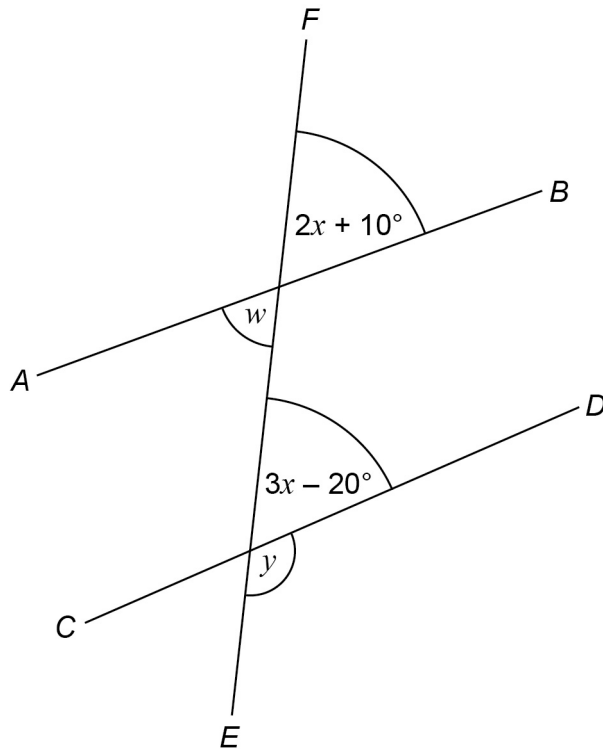
Give an example to show that he could be correct.

[2 marks]

Turn over for the next question



24 AB , CD and EF are straight lines.



Not drawn
accurately

24 (a) Ava assumes that AB and CD are parallel.

What answer should she get for the size of angle y ?

[4 marks]

Answer _____ degrees



24 (b) In fact,
 AB and CD are **not** parallel
angle w is 60°

What effect does this have on the size of angle y ?

Tick a box.

y is bigger

y is the same

y is smaller

Show working to support your answer.

[3 marks]

Turn over for the next question

7

Turn over ►



25 There are 720 boys and 700 girls in a school.

The probability that a boy chosen at random studies French is $\frac{2}{3}$

The probability that a girl chosen at random studies French is $\frac{3}{5}$

25 (a) Work out the number of students in the school who study French.

[3 marks]

Answer _____

25 (b) Work out the probability that a student chosen at random from the whole school does **not** study French.

[2 marks]

Answer _____



26

Circle the expression equivalent to $x^2 - 4x - 12$

[1 mark]

$(x - 4)(x - 8)$

$(x + 3)(x - 4)$

$(x - 12)(x + 1)$

$(x + 2)(x - 6)$

27

How are the whole number solutions to A and B different?

A Solve $3 \leq 3x < 18$

B Solve $3 < 3x \leq 18$

[2 marks]

END OF QUESTIONS



There are no questions printed on this page

**DO NOT WRITE ON THIS PAGE
ANSWER IN THE SPACES PROVIDED**



There are no questions printed on this page

**DO NOT WRITE ON THIS PAGE
ANSWER IN THE SPACES PROVIDED**



There are no questions printed on this page

**DO NOT WRITE ON THIS PAGE
ANSWER IN THE SPACES PROVIDED**

Copyright Information

For confidentiality purposes, from the November 2015 examination series, acknowledgements of third party copyright material will be published in a separate booklet rather than including them on the examination paper or support materials. This booklet is published after each examination series and is available for free download from www.aqa.org.uk after the live examination series.

Permission to reproduce all copyright material has been applied for. In some cases, efforts to contact copyright-holders may have been unsuccessful and AQA will be happy to rectify any omissions of acknowledgements. If you have any queries please contact the Copyright Team, AQA, Stag Hill House, Guildford, GU2 7XJ.

Copyright © 2017 AQA and its licensors. All rights reserved.

