

Please write clearly, in block capitals.

Centre number

--	--	--	--	--

Candidate number

--	--	--	--

Surname _____

Forename(s) _____

Candidate signature _____

GCSE MATHEMATICS

F

Foundation Tier Paper 3

Exam Date

Morning

Time allowed: 1 hour 30 minutes

Materials

For this paper you must have:

- a calculator
- mathematical instruments.



Instructions

- Use black ink or black ball-point pen. Draw diagrams in pencil.
- Answer **all** questions.
- You must answer the questions in the spaces provided. Do not write outside the box around each page or on blank pages.
- Do all rough work in this book. Cross through any work you do not want to be marked.

Information

- The marks for questions are shown in brackets.
- The maximum mark for this paper is 80.
- You may ask for more answer paper, graph paper and tracing paper. These must be tagged securely to this answer book.

Advice

- In all calculations, show clearly how you work out your answer.

Answer **all** questions in the spaces provided.

1 Circle the decimal that has the same value as $\frac{4}{5}$

[1 mark]

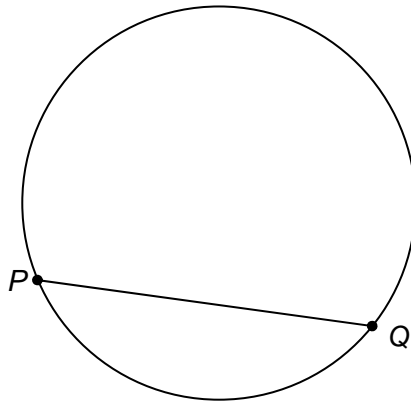
0.04

0.4

0.45

0.8

2 Circle the word that describes the straight line PQ .



[1 mark]

chord

diameter

radius

tangent

3 $x = 2500$ to the nearest 100

Circle the smallest possible value of x .

[1 mark]

2449

2450

2495

2499

4 What is one quarter of 5 hours?

Tick a box.

[1 mark]

1 hour 15 minutes

115 minutes

1 hour 25 minutes

125 minutes

Turn over for the next question

5 Simplify $6w - 5x - 4w - 2x$

[2 marks]

Answer _____

6 Beth uses these four cards to make 4-digit numbers.



How many **different** 4-digit numbers can she make that are greater than 8000?

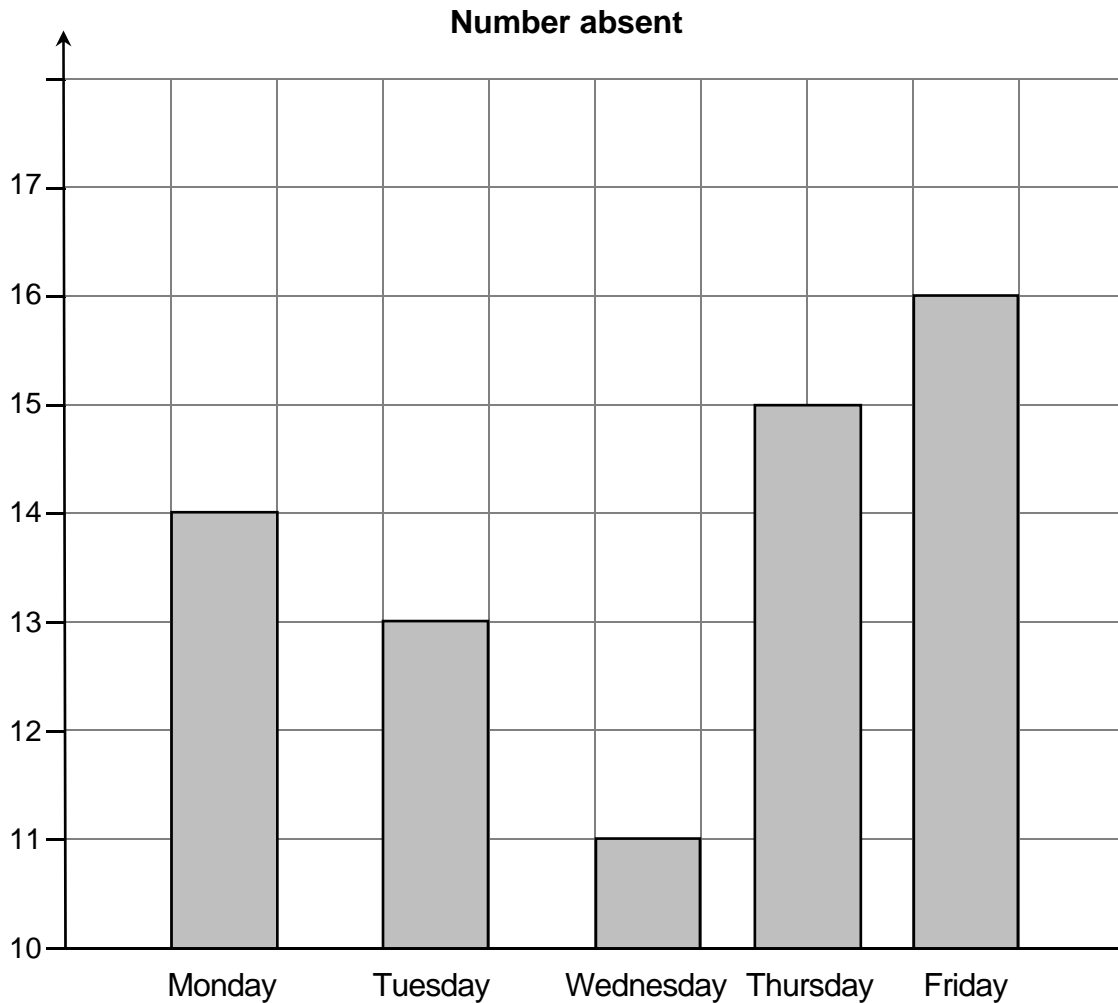
[2 marks]

Answer _____

- 7 The table shows the number of Year 11 students who were absent in one week.

	Monday	Tuesday	Wednesday	Thursday	Friday
Number absent	14	13	11	15	16

Jack uses this information to draw a bar chart.



Write down **two** mistakes that he has made.

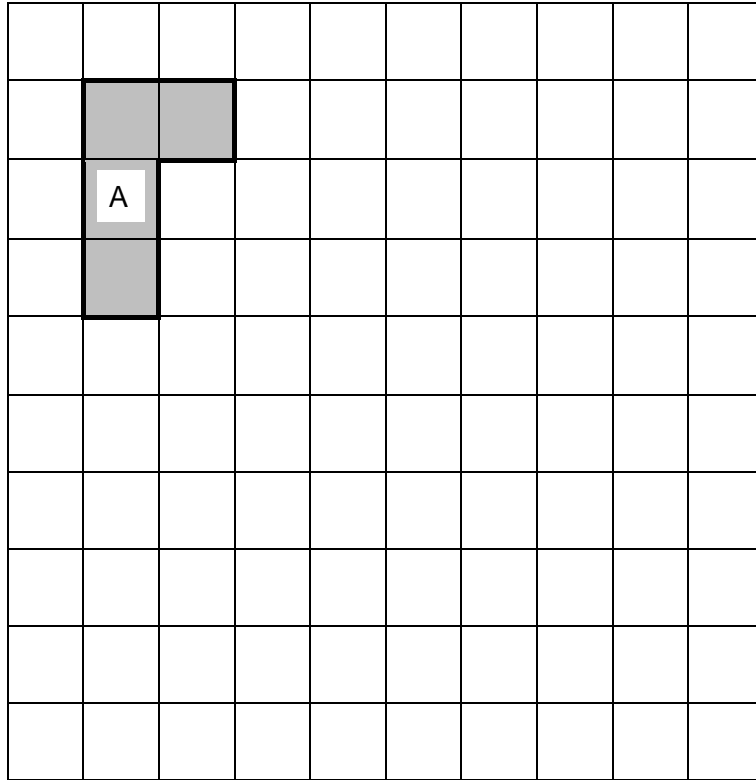
[2 marks]

Mistake 1 _____

Mistake 2 _____


- 8 (a)** On the grid draw a shape that is a reflection of shape A.
Show your mirror line.

[1 mark]



8 (b) On this grid draw a shape that is an enlargement of shape A.

[1 mark]



Turn over for the next question

9 (a)

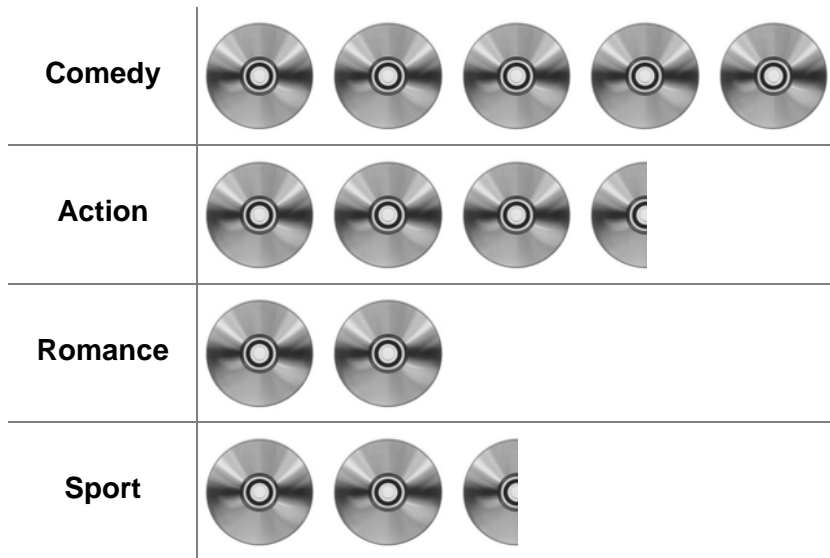


How many DVDs do you get for £35?

[3 marks]

Answer _____

- 9 (b) The pictogram shows some information about DVDs.
The key is missing.



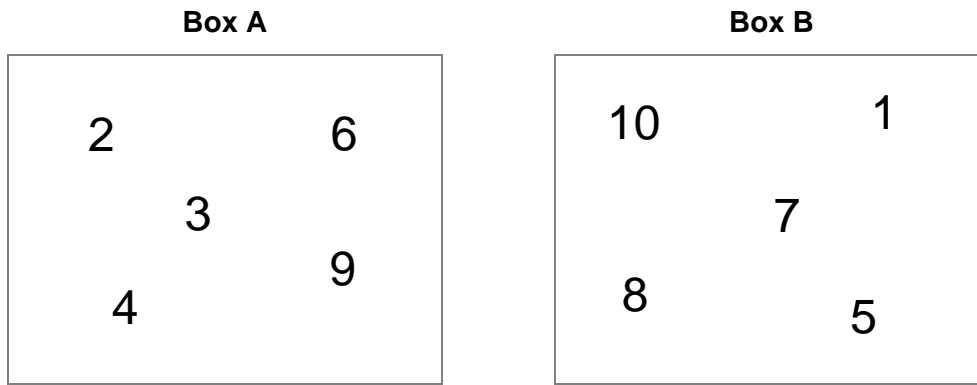
The total number of DVDs is 260

Work out the number of **Sport** DVDs.

[4 marks]

Answer _____

10



Two of the numbers move from Box A to Box B.

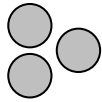
The total of the numbers in Box B is now **four** times the total of the numbers in Box A.

Which **two** numbers move?

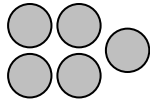
[2 marks]

Answer _____ and _____

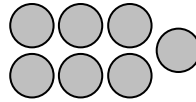
- 11** The diagram shows a sequence of patterns.



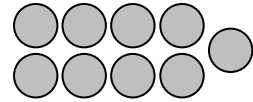
Pattern 1



Pattern 2



Pattern 3



Pattern 4

- 11 (a)** Work out the number of circles in Pattern 6

[1 mark]

Answer _____

- 11 (b)** Complete the rule below.

[1 mark]

$$\text{Number of circles} = \text{Pattern number} \times \square + \square$$

- 11 (c)** Which Pattern number has 51 circles?

[1 mark]

Pattern _____

12 In 2012 electricity cost 15p per unit.
A family used 3729 units.

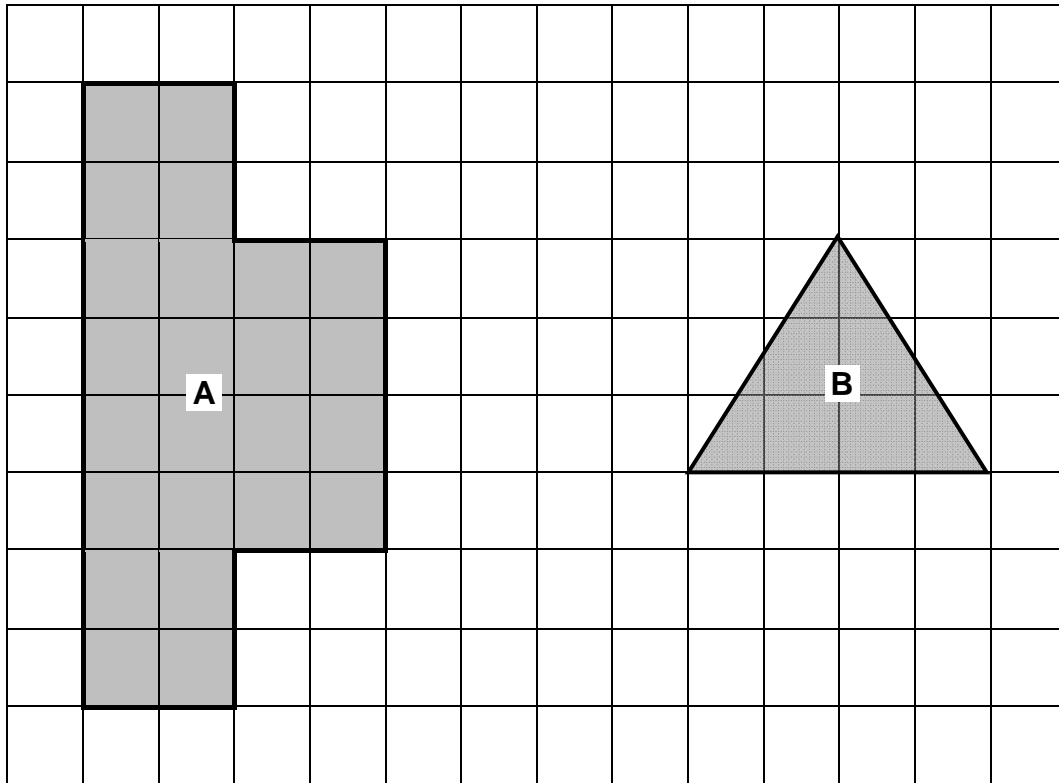
In 2013 electricity cost 17p per unit.
The family used 3506 units.

How much **more** did the family pay for electricity in 2013?

[3 marks]

Answer £ _____

13



Work out area of shape A : area of shape B

Give your answer in its simplest form.

[3 marks]

Answer _____ :

14 Work out 258% of 6300

[2 marks]

Answer _____

15 You are given that

$$a = 3 \text{ and } b = 5$$

Tick whether each statement is true or false.

Give a reason for each answer.


[2 marks]

Statement	True	False	Reason
$ab = 35$			
$2b^2 = 100$			

- 16** The pie chart shows some information about the share of votes for candidates in an election.

Election Results

Not drawn accurately



The angle for Mrs Wood would be 24° more than the angle for Mrs Patel.
There were 5220 votes in total.

Work out the number of votes for Mrs Patel.

[4 marks]


Answer _____

17 White paint and red paint are mixed together in the ratio 2 : 3

17 (a) Draw a graph that can be used to work out the amount of red paint needed given the amount of white paint.

Your graph **must** show up to 10 litres of white paint.

[3 marks]



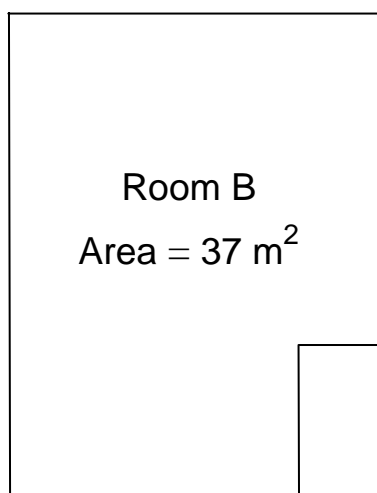
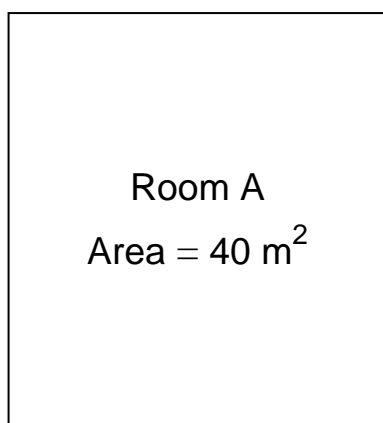
17 (b) How much red paint needs to be mixed with 9 litres of white paint?

[1 mark]

Answer _____ litres

19

A children's nursery uses one room for babies and one room for toddlers.



Not drawn
accurately

Each baby needs at least 3.5 m^2 of floor space.

Each toddler needs at least 2.5 m^2 of floor space.

20

Work out the next term of this quadratic sequence.

[2 marks]

4

12

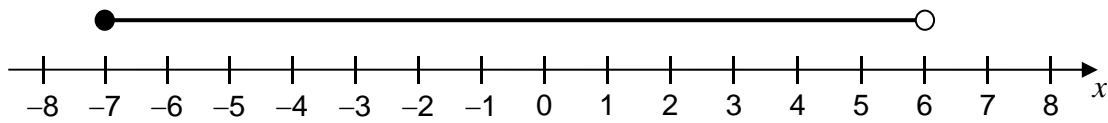
24

40

Answer _____

- 21 Circle the inequality shown by the diagram.

[1 mark]



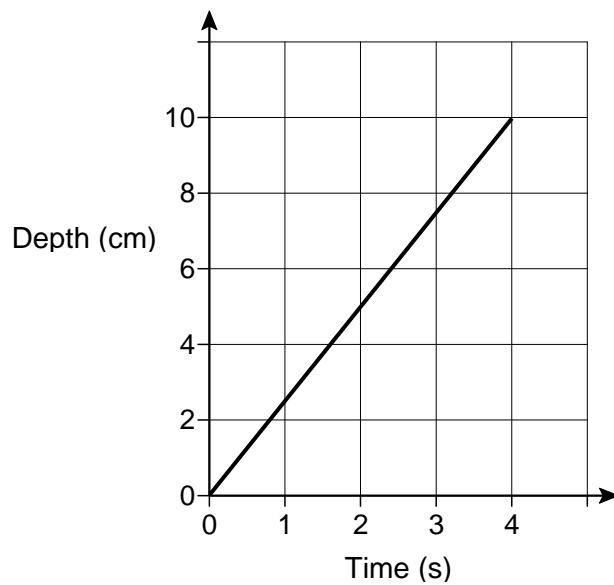
$-7 < x < 6$

$-7 \leq x < 6$

$-7 < x \leq 6$

$-7 \leq x \leq 6$

- 22 Water is poured into a glass for 4 seconds.
The graph shows the depth of the water in the glass.



What is the rate of change of the depth of the water?
Circle your answer.

[1 mark]

0.4 cm/s

1.25 cm/s

2.5 cm/s

10 cm/s

23 Here is an ordinary dice.



23 (a) Ali is going to throw the dice six times.

He says,

“I will get one of each number.”

Give a reason why he could be wrong.

[1 mark]

23 (b) Lucy throws the dice 50 times.

Her results are shown.

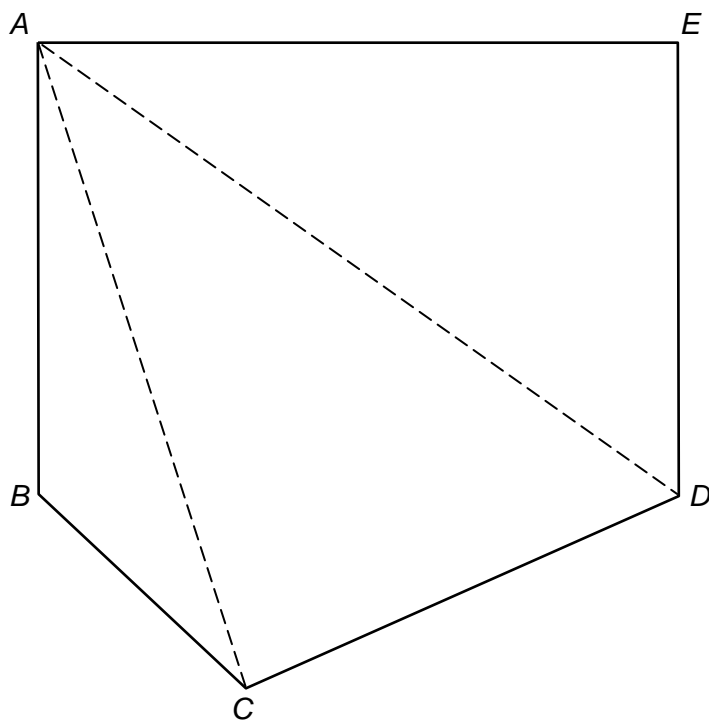
Number thrown	1	2	3	4	5	6
Frequency	7	4	12	5	9	13

Work out the relative frequency of throwing an odd number.

[2 marks]

Answer _____

- 24 Polygon $ABCDE$ is divided into triangles as shown.



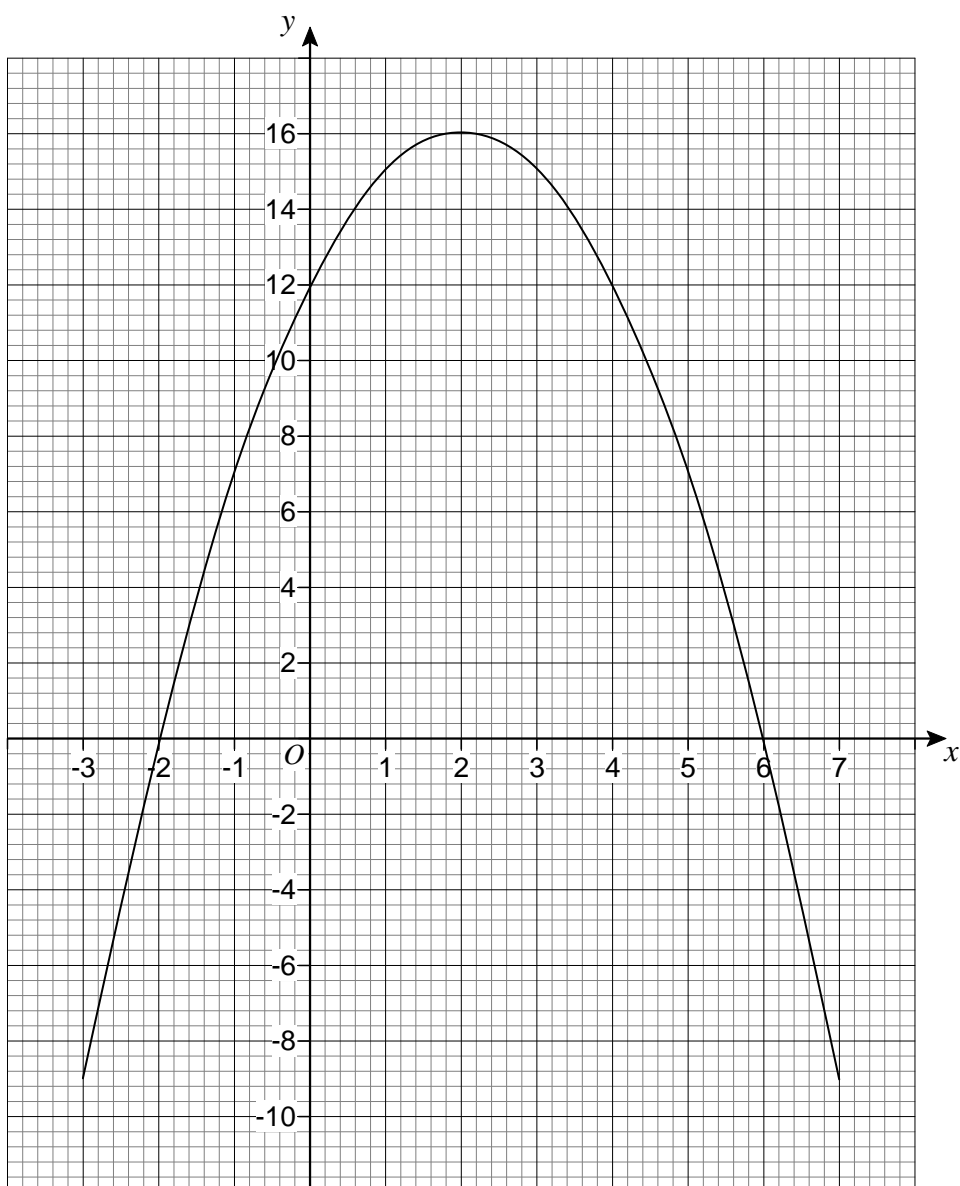
Not drawn
accurately

Use the triangles to work out the sum of the interior angles of polygon $ABCDE$.
You **must** show your working.

[2 marks]

Answer _____ degrees

- 25 The graph $y = a + bx - x^2$ is shown.



- 25 (a) Circle the coordinates of the turning point of the curve.

[1 mark]

(-2, 0)

(0, 12)

(2, 16)

(6, 0)

- 25 (b) Circle the value of a .

[1 mark]

-2

12

16

6

25 (c) Circle the two roots of $a + bx - x^2 = 0$

[1 mark]

-2 and 6

2 and -6

2 and 6

-2 and -6

26 In a school, 60% of the students are girls.

50% of the girls walk to school.

20% of the boys walk to school.

What percentage of the students walk to school?

[3 marks]

Answer _____ %

Turn over for the next question

27 (a) Factorise fully $9a^2 - 6a$

[2 marks]

Answer _____

27 (b) Solve $x^2 - 12x + 20 = 0$

[3 marks]

Answer _____

28 Adam and six other men ran a race.

The times, in seconds, of the six other men are shown.

9.75 9.79 9.80 9.88 9.94 9.98

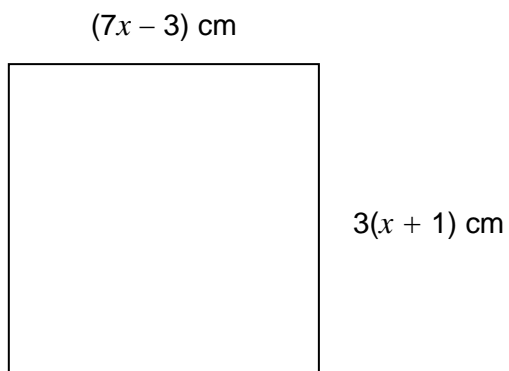
The mean time for **all** seven men was 9.83 seconds.

Did Adam win the race?

You **must** show your working.

[3 marks]

- 29 The diagram shows a square.



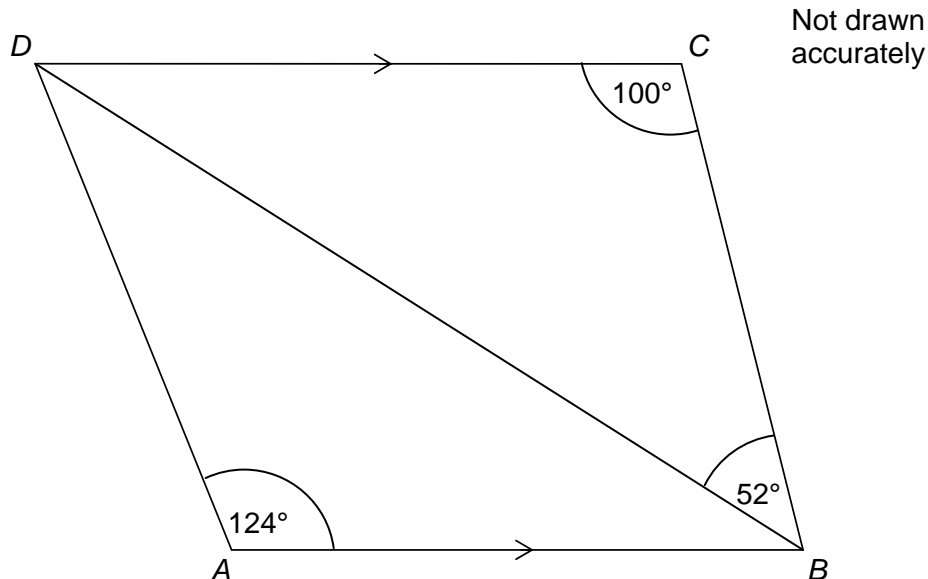
Work out the length of one side of the square.

[4 marks]

Answer _____ cm

30

In the diagram, DC is parallel to AB .



Show that triangle ABD is isosceles.

[3 marks]

END OF QUESTIONS

Copyright Information

For confidentiality purposes, from the November 2015 examination series, acknowledgements of third party copyright material will be published in a separate booklet rather than including them on the examination paper or support materials. This booklet is published after each examination series and is available for free download from www.aqa.org.uk after the live examination series.

Permission to reproduce all copyright material has been applied for. In some cases, efforts to contact copyright-holders may have been unsuccessful and AQA will be happy to rectify any omissions of acknowledgements. If you have any queries please contact the Copyright Team, AQA, Stag Hill House, Guildford, GU2 7XJ.

Copyright © 2015 AQA and its licensors. All rights reserved.